

CANDIDATE
NAME

CENTRE
NUMBER

--	--	--	--	--

CANDIDATE
NUMBER

--	--	--	--



ENVIRONMENTAL MANAGEMENT

8291/21

Paper 2 Hydrosphere and Biosphere

May/June 2019

1 hour 30 minutes

Additional Materials: Answer Booklet/Paper

READ THESE INSTRUCTIONS FIRST

Write your centre number, candidate number and name on all the work you hand in.
Write in dark blue or black pen.
You may use an HB pencil for any diagrams or graphs.
Do not use staples, paper clips, glue or correction fluid.
DO NOT WRITE IN ANY BARCODES.

Electronic calculators may be used.
You may lose marks if you do not show your working or if you do not use appropriate units.

Section A

Answer **all** questions in this section.
Write your answers in the spaces provided on the question paper.

Section B

Answer **one** question from this section.
Write your answers on the separate answer paper provided.

At the end of the examination,

1. fasten all separate answer paper securely to the question paper;
2. enter the question number from Section B in the grid.

	For Examiner's Use
Section A	/
1	
2	
Section B	/
Total	

This document consists of **12** printed pages.

Section A

Answer **all** questions in this section.

Write your answers in the spaces provided.

- 1 (a) Fig. 1.1 shows maps of Bangladesh and the surrounding area. Most of Bangladesh is a low-lying area where floods often occur.

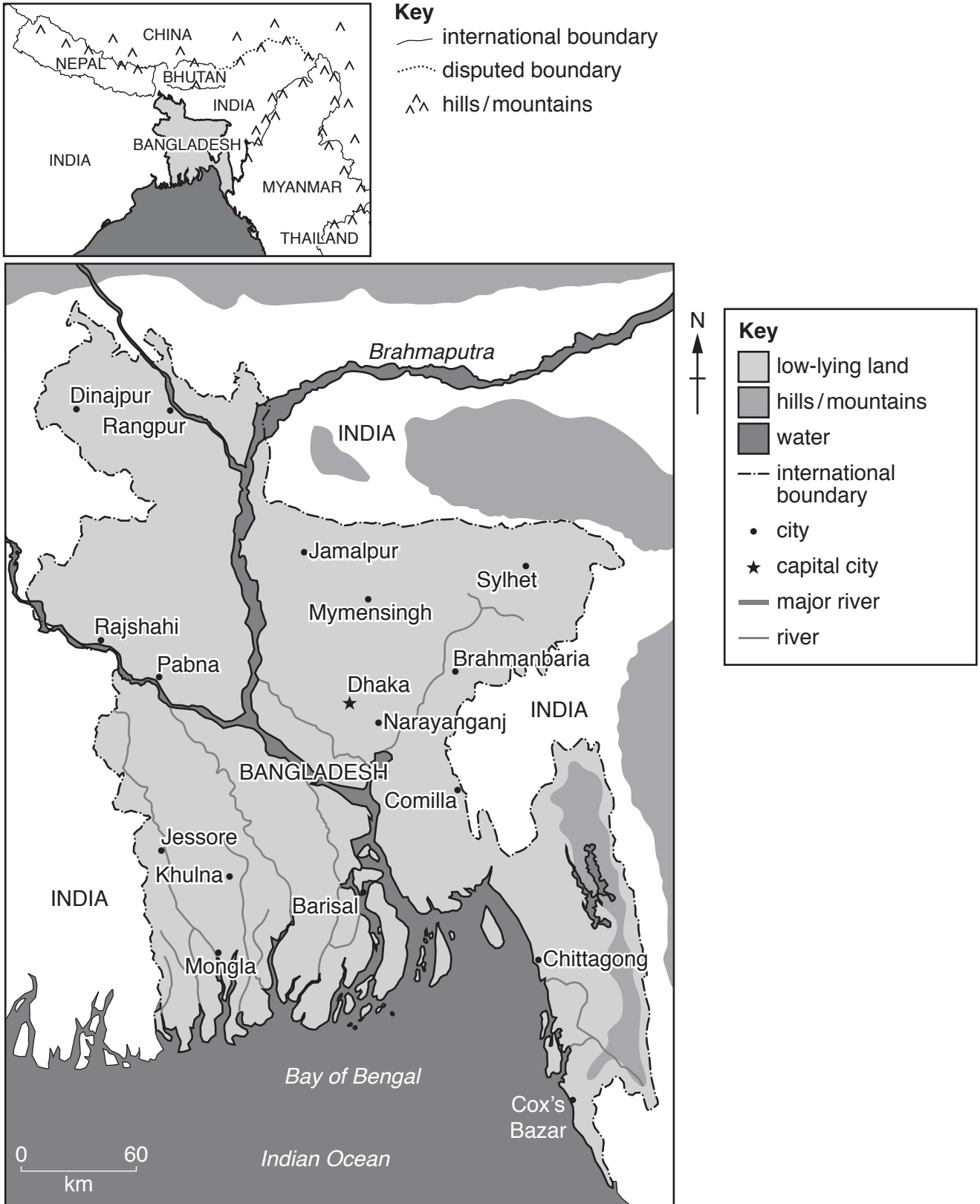


Fig. 1.1

(i) With reference to Fig. 1.1, suggest how the following human activities could cause flooding in Bangladesh:

increased deforestation in Nepal

.....
.....
.....

increased dam building in India

.....
.....
.....

increased population in Bangladesh.

.....
.....
..... [6]

(ii) With reference to Fig. 1.1, suggest the impacts on Bangladesh of rising sea levels due to global warming.

.....
.....
.....
.....
.....
.....
.....
..... [4]

(b) Fig. 1.2 is an internet article about world population growth and water supply.

The 2009 World Water Development report stated that in 2000, 508 million people inhabited water-scarce regions. The report predicted that the percentage of the world population affected by water scarcity could increase from 8% in 2000 to 47% in 2030. Water scarcity is directly linked to poverty.

World population is expanding by 80 million people per year, increasing the demand for fresh water by about 64 billion m³ a year. Water withdrawals tripled over the last 50 years as a result of population growth. This rapid growth also caused the potential global availability of fresh water to decline.

Fig. 1.2

(i) Using Fig. 1.2, describe the relationship between human population growth and water scarcity.

.....

.....

.....

..... [2]

(ii) The human population is predicted to be 8.5 billion (8500 000 000) in 2030. Calculate how many people could be affected by water scarcity according to Fig. 1.2.

..... billion [2]

(iii) State what is meant by the term *water demand*.

.....

..... [1]

- 2 (a) Fig. 2.1 is a map of a region of the North West Pacific and a graph showing total input of nitrogen compounds into the sea for the areas marked on the map.

Nitrogen compounds can be used as an indicator of the amount of pollution in water.

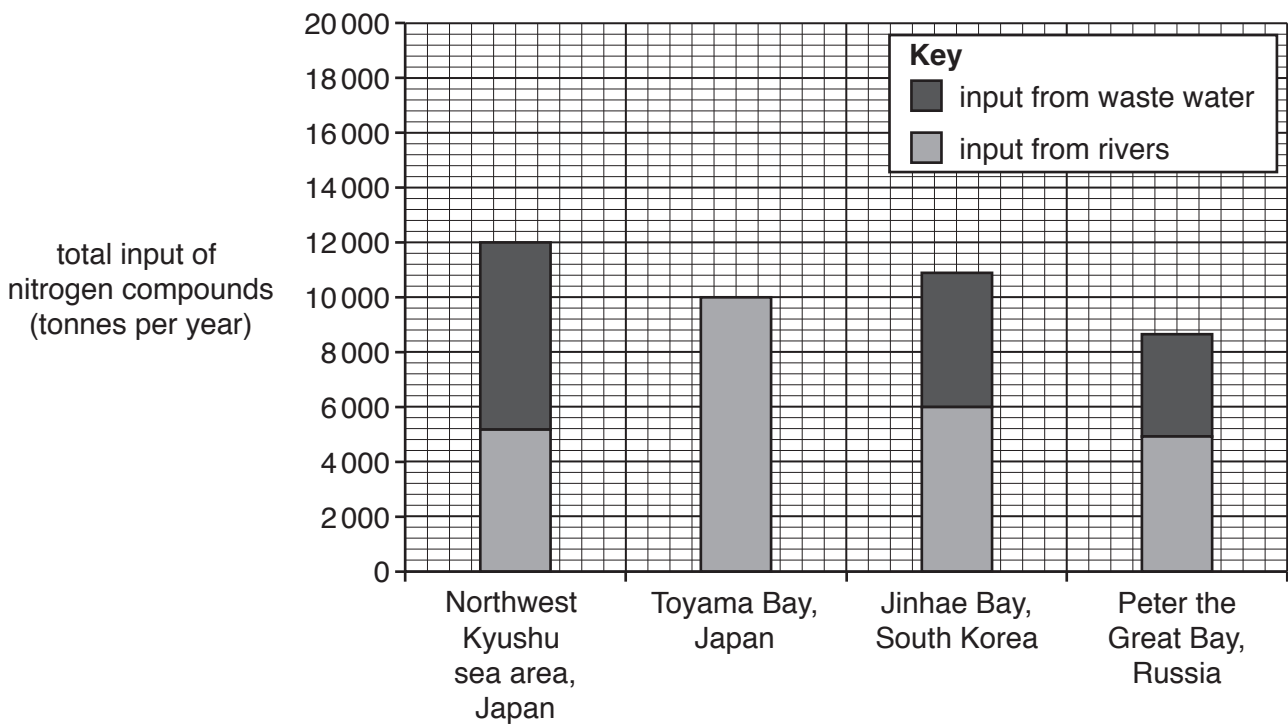
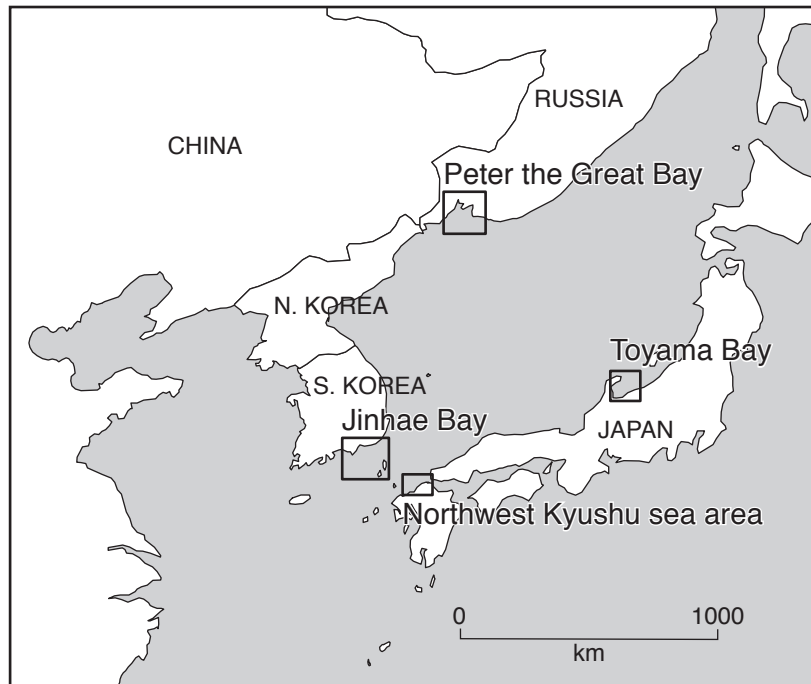


Fig. 2.1

(v) Suggest **two** human activities that lead to the pollution of water stores.

1.
.....
2.
..... [2]

(b) Fig. 2.2 shows part of a food web for the North West Pacific region shown in Fig. 2.1.

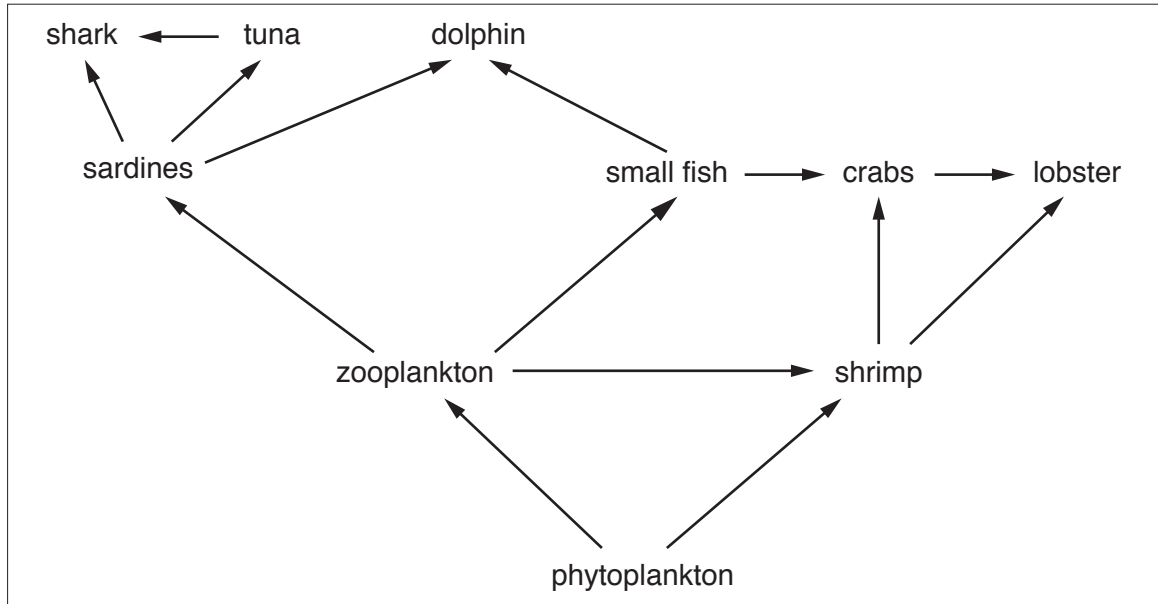


Fig. 2.2

(i) State **two** primary consumers shown in Fig. 2.2.

-
..... [2]

(ii) Tuna are becoming endangered in this region.

Suggest **two** possible effects of this on the food web shown in Fig. 2.2.

-
.....
.....
..... [2]

(iii) Marine ecosystems are under threat from a range of human activities.

Suggest strategies to manage these threats and to conserve these important habitats.

.....

.....

.....

.....

.....

.....

.....

.....

..... [4]

[Total: 20]

Section B

Answer **one** question from this section.

Write your answers on the separate answer paper provided

- 3 Fig. 3.1 is a flow diagram showing the effect of human pressure on an ecosystem and the possible management response.

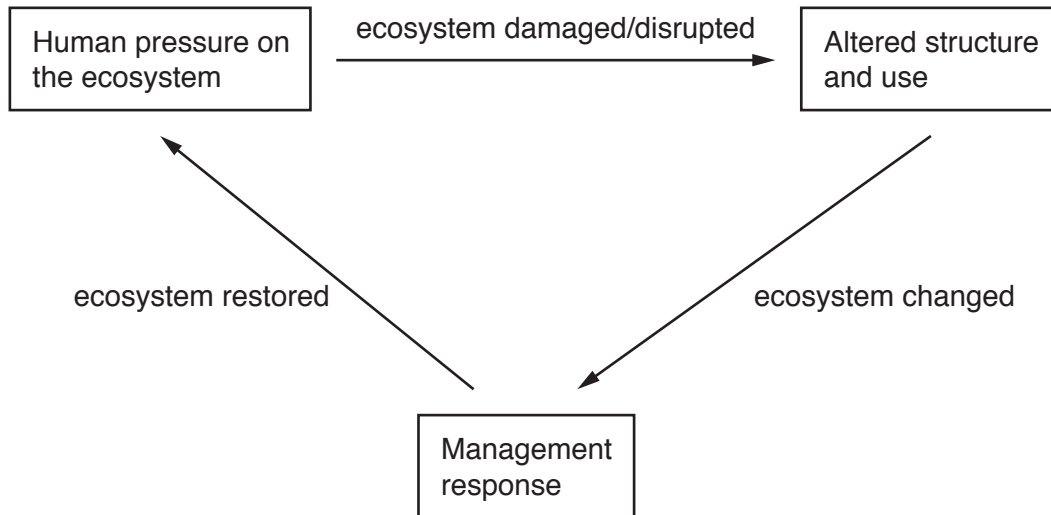


Fig. 3.1

- (a) With reference to Fig. 3.1, describe the effects of human activity on a named terrestrial ecosystem. [10]
- (b) 'It is important to balance the needs of an increasing population with the need to protect the resources of the biosphere'.

Using examples of countries with contrasting levels of economic development, assess the problems of achieving this balance. [30]

[Total: 40]

- 4 Fig. 4.1 is a series of photographs showing changes in the Grinnell Glacier, Montana, USA, between the years 1938 and 1998.




Fig. 4.1

- (a) Suggest how human activities might have led to the loss of the ice store shown in Fig. 4.1. [10]
- (b) Assess the impact of international protocols on the loss of natural water stores. Describe the difficulties in achieving such agreements. [30]

[Total: 40]

5 Fig. 5.1 shows details of the tropical rainforests in West and Central Africa.

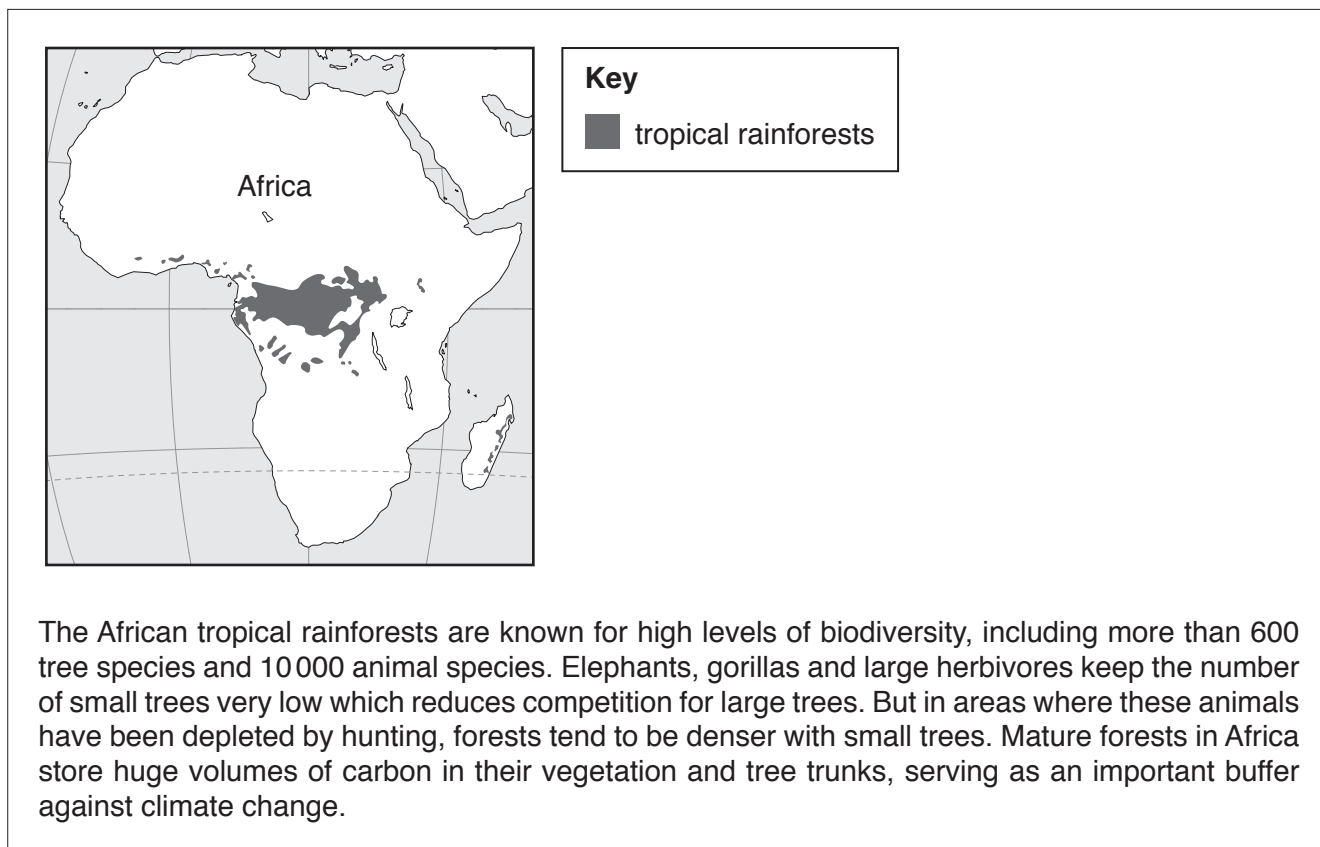


Fig. 5.1

- (a) Describe the human activities which can lead to the loss of tropical rainforests such as those in Fig. 5.1. [10]
- (b) Explain how ecotourism can lead to the successful conservation of rainforests. Using examples, assess the advantages and disadvantages of ecotourism projects. [30]

[Total: 40]

Permission to reproduce items where third-party owned material protected by copyright is included has been sought and cleared where possible. Every reasonable effort has been made by the publisher (UCLES) to trace copyright holders, but if any items requiring clearance have unwittingly been included, the publisher will be pleased to make amends at the earliest possible opportunity.

To avoid the issue of disclosure of answer-related information to candidates, all copyright acknowledgements are reproduced online in the Cambridge Assessment International Education Copyright Acknowledgements Booklet. This is produced for each series of examinations and is freely available to download at www.cambridgeinternational.org after the live examination series.

Cambridge Assessment International Education is part of the Cambridge Assessment Group. Cambridge Assessment is the brand name of the University of Cambridge Local Examinations Syndicate (UCLES), which itself is a department of the University of Cambridge.