



Cambridge International AS & A Level

GEOGRAPHY

9696/21

Paper 2 Core Human Geography

October/November 2020

INSERT

1 hour 30 minutes

INFORMATION

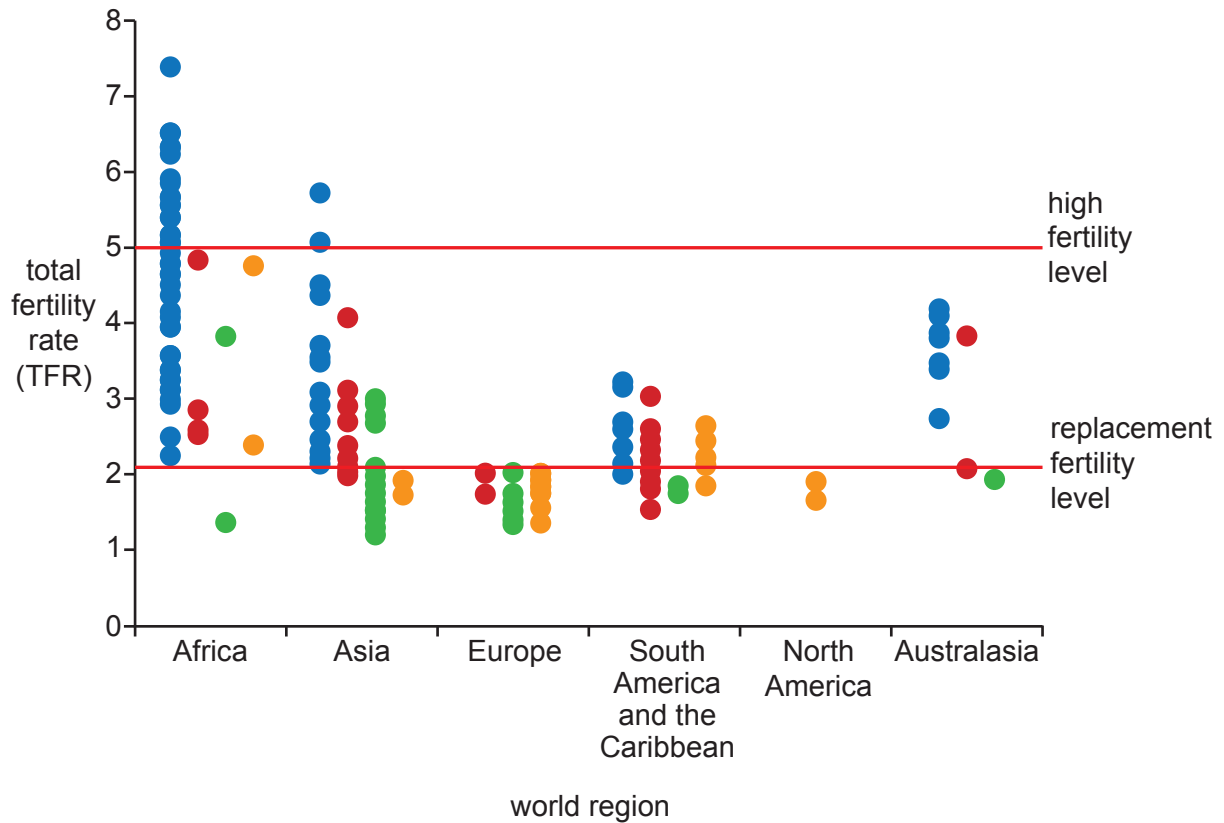
- This insert contains all the resources referred to in the questions.
- You may annotate this insert and use the blank spaces for planning. **Do not write your answers** on the insert.



This document has 4 pages. Blank pages are indicated.

Fig. 1.1 for Question 1

Total fertility rates (TFR) and fertility policy, by world region, 2016

**Key**

fertility policy (one dot = one country)

- lower fertility rate
- maintain fertility rate
- raise fertility rate
- no policy

Fig. 2.1 for Question 2

Percentage of female migrants of all international migrants, by age and region, 2017

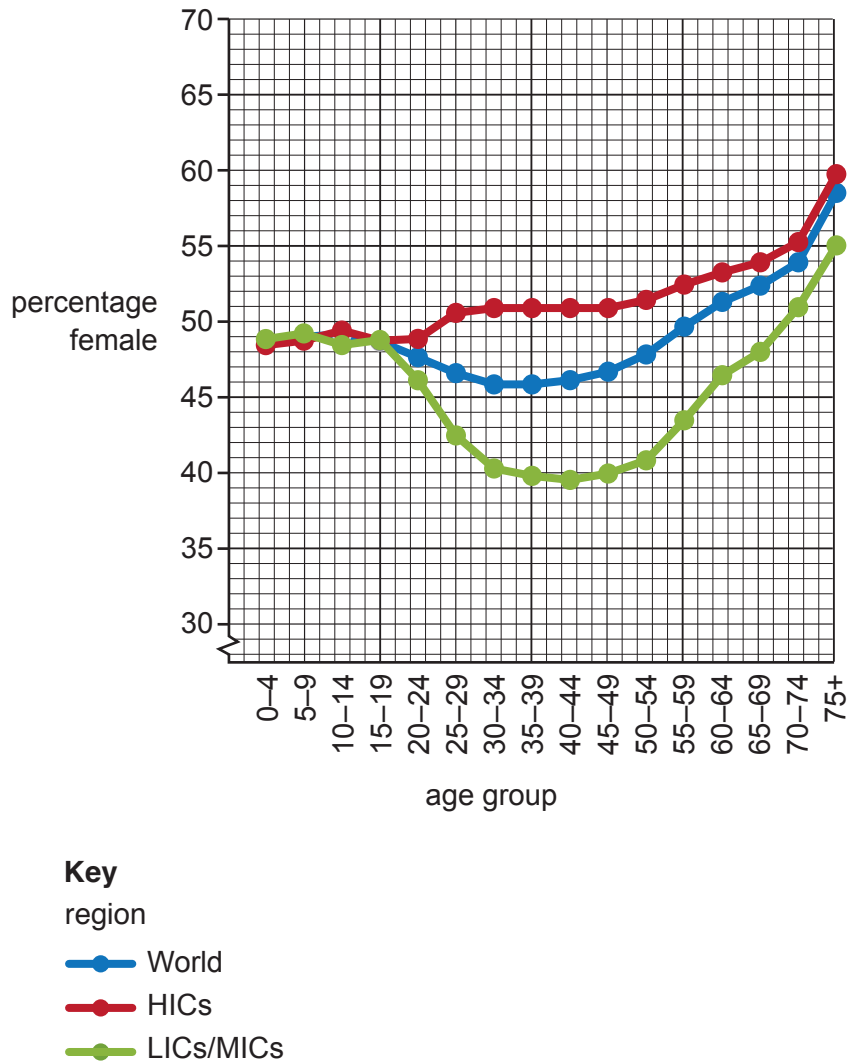
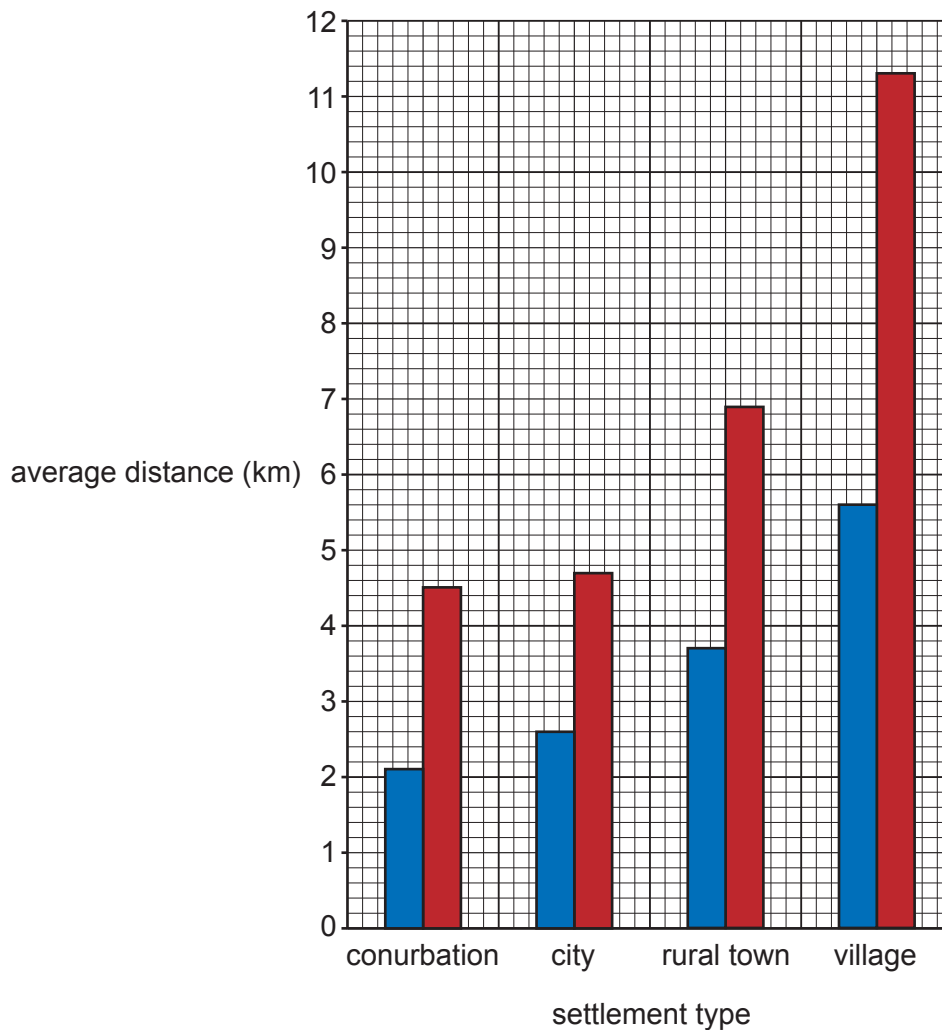


Fig. 3.1 for Question 3

Average journey distance to school, by settlement type and age group, in England, UK, an HIC in Europe, 2015



Key

age group

■ 5–10 years

■ 11–16 years

Permission to reproduce items where third-party owned material protected by copyright is included has been sought and cleared where possible. Every reasonable effort has been made by the publisher (UCLES) to trace copyright holders, but if any items requiring clearance have unwittingly been included, the publisher will be pleased to make amends at the earliest possible opportunity.

To avoid the issue of disclosure of answer-related information to candidates, all copyright acknowledgements are reproduced online in the Cambridge Assessment International Education Copyright Acknowledgements Booklet. This is produced for each series of examinations and is freely available to download at www.cambridgeinternational.org after the live examination series.

Cambridge Assessment International Education is part of the Cambridge Assessment Group. Cambridge Assessment is the brand name of the University of Cambridge Local Examinations Syndicate (UCLES), which itself is a department of the University of Cambridge.