



**Cambridge International Examinations**  
Cambridge International General Certificate of Secondary Education

CANDIDATE NAME

CENTRE NUMBER

CANDIDATE NUMBER



**CAMBRIDGE INTERNATIONAL MATHEMATICS**

**0607/21**

Paper 2 (Extended)

**May/June 2018**

**45 minutes**

Candidates answer on the Question Paper.

Additional Materials: Geometrical Instruments

**READ THESE INSTRUCTIONS FIRST**

Write your Centre number, candidate number and name on all the work you hand in.

Write in dark blue or black pen.

Do not use staples, paper clips, glue or correction fluid.

You may use an HB pencil for any diagrams or graphs.

**DO NOT WRITE IN ANY BARCODES.**

Answer **all** the questions.

**CALCULATORS MUST NOT BE USED IN THIS PAPER.**

All answers should be given in their simplest form.

You must show all the relevant working to gain full marks and you will be given marks for correct methods even if your answer is incorrect.

The number of marks is given in brackets [ ] at the end of each question or part question.

The total number of marks for this paper is 40.

This document consists of **8** printed pages.

## Formula List

For the equation  $ax^2 + bx + c = 0$   $x = \frac{-b \pm \sqrt{b^2 - 4ac}}{2a}$

Curved surface area,  $A$ , of cylinder of radius  $r$ , height  $h$ .  $A = 2\pi rh$

Curved surface area,  $A$ , of cone of radius  $r$ , sloping edge  $l$ .  $A = \pi rl$

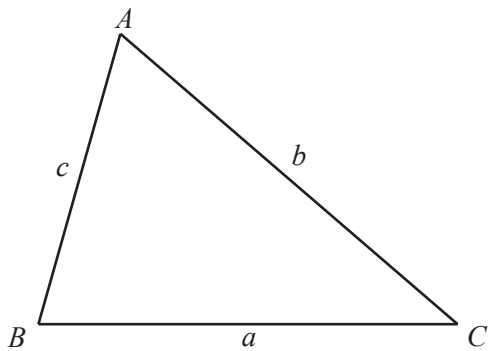
Curved surface area,  $A$ , of sphere of radius  $r$ .  $A = 4\pi r^2$

Volume,  $V$ , of pyramid, base area  $A$ , height  $h$ .  $V = \frac{1}{3}Ah$

Volume,  $V$ , of cylinder of radius  $r$ , height  $h$ .  $V = \pi r^2 h$

Volume,  $V$ , of cone of radius  $r$ , height  $h$ .  $V = \frac{1}{3}\pi r^2 h$

Volume,  $V$ , of sphere of radius  $r$ .  $V = \frac{4}{3}\pi r^3$



$$\frac{a}{\sin A} = \frac{b}{\sin B} = \frac{c}{\sin C}$$

$$a^2 = b^2 + c^2 - 2bc \cos A$$

$$\text{Area} = \frac{1}{2}bc \sin A$$

Answer **all** the questions.

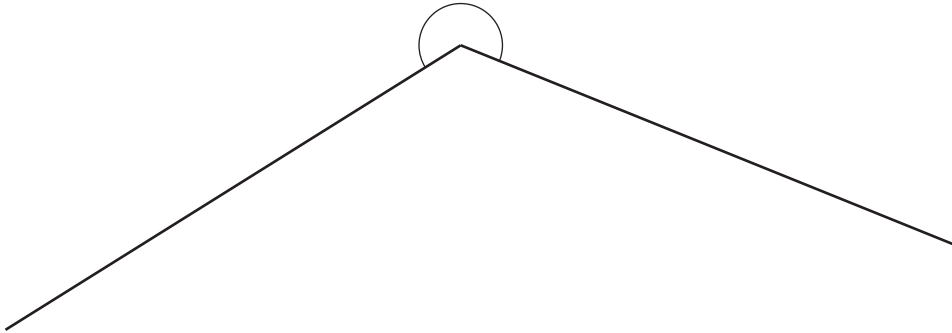
- 1 (a) Work out  $5 - 7 \times 2 + 8$ .

..... [1]

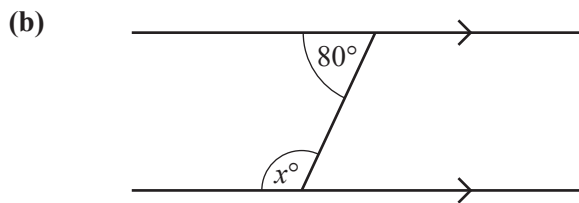
- (b) Find  $\sqrt[3]{0.001}$ .

..... [1]

- 2 (a) Find, by measuring, the size of this reflex angle.



..... [1]



NOT TO SCALE

Work out the value of  $x$ .

$x =$  ..... [1]

- (c) Find the size of one exterior angle of a regular 18-sided polygon.

..... [2]

3 Solve these simultaneous equations.

$$x - 3y = 7$$

$$x - 2y = 5$$

$$x = \dots\dots\dots$$

$$y = \dots\dots\dots [2]$$

4 (a) Write 0.68 as a fraction in its lowest terms.

$$\dots\dots\dots [1]$$

(b) Work out  $\frac{3}{7} \div \frac{8}{9}$ .

$$\dots\dots\dots [2]$$

5 These are the first five terms of a sequence.

1      0      1      4      9

Find the  $n$ th term of this sequence.

$$\dots\dots\dots [2]$$

- 6 (a) Expand and simplify.

$$(2p - 7q)(p + q)$$

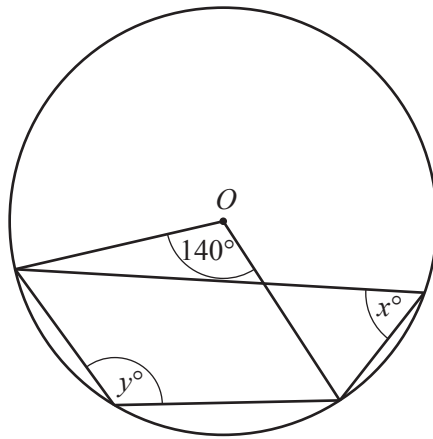
..... [2]

- (b) Factorise.

$$2 - t - 2a + at$$

..... [2]

7



NOT TO  
SCALE

$O$  is the centre of the circle.

Find the value of  $x$  and the value of  $y$ .

$x =$  .....

$y =$  ..... [2]

- 8  $y$  varies inversely as  $x^2$ .  
When  $x = 3$ ,  $y = 4$ .

Find  $y$  in terms of  $x$ .

$$y = \dots\dots\dots [2]$$

- 9 (a) Find the value of  $27^{\frac{2}{3}}$ .

$$\dots\dots\dots [1]$$

- (b) Simplify  $18h^{18} \div 3h^3$ .

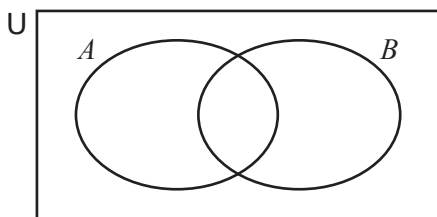
$$\dots\dots\dots [2]$$

- 10  $v^2 = u^2 - 2as$

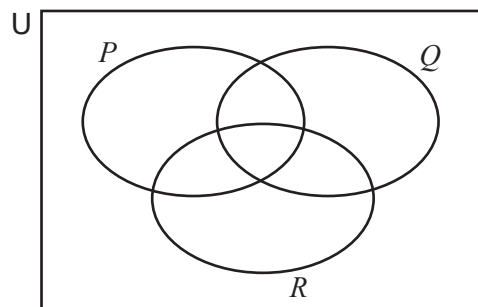
Find  $s$  in terms of  $a$ ,  $u$  and  $v$ .

$$s = \dots\dots\dots [2]$$

- 11 In each Venn diagram, shade the region indicated.



$$(A \cup B)'$$



$$(P \cup Q) \cap R$$

[2]

- 12 (a) Simplify fully.

$$\sqrt{700}$$

..... [1]

- (b) Rationalise the denominator.

$$\frac{1}{7-\sqrt{2}}$$

..... [2]

- 13 Simplify fully.

$$\frac{3t-t^2}{9-t^2}$$

..... [3]

- 14 (a) Write down the value of  $\log_9 3$ .

..... [1]

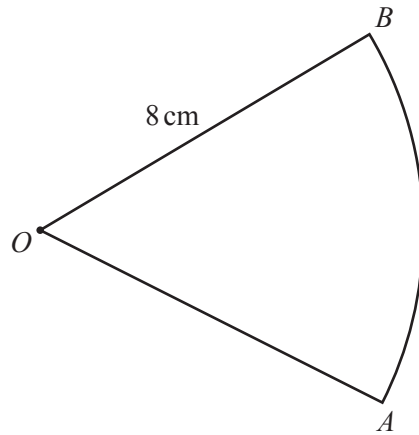
- (b)  $2 \log 2 + \log 11 = \log x$ .

Find the value of  $x$ .

$x =$  ..... [2]

**Question 15 is printed on the next page.**

15

NOT TO  
SCALE

The length of the arc  $AB = \frac{4\pi}{3}$  cm.

The area of the sector  $OAB$  is  $k\pi$  cm<sup>2</sup>.

Find the value of  $k$ .

$k = \dots\dots\dots$  [3]

---

Permission to reproduce items where third-party owned material protected by copyright is included has been sought and cleared where possible. Every reasonable effort has been made by the publisher (UCLES) to trace copyright holders, but if any items requiring clearance have unwittingly been included, the publisher will be pleased to make amends at the earliest possible opportunity.

To avoid the issue of disclosure of answer-related information to candidates, all copyright acknowledgements are reproduced online in the Cambridge International Examinations Copyright Acknowledgements Booklet. This is produced for each series of examinations and is freely available to download at [www.cie.org.uk](http://www.cie.org.uk) after the live examination series.

Cambridge International Examinations is part of the Cambridge Assessment Group. Cambridge Assessment is the brand name of University of Cambridge Local Examinations Syndicate (UCLES), which is itself a department of the University of Cambridge.