



Cambridge IGCSE™

CANDIDATE
NAME

CENTRE
NUMBER

--	--	--	--	--

CANDIDATE
NUMBER

--	--	--	--

CAMBRIDGE INTERNATIONAL MATHEMATICS

0607/52

Paper 5 Investigation (Core)

May/June 2023

1 hour 10 minutes

You must answer on the question paper.

No additional materials are needed.

INSTRUCTIONS

- Answer **all** questions.
- Use a black or dark blue pen. You may use an HB pencil for any diagrams or graphs.
- Write your name, centre number and candidate number in the boxes at the top of the page.
- Write your answer to each question in the space provided.
- Do **not** use an erasable pen or correction fluid.
- Do **not** write on any bar codes.
- You should use a graphic display calculator where appropriate.
- You may use tracing paper.
- You must show all necessary working clearly, including sketches, to gain full marks for correct methods.
- In this paper you will be awarded marks for providing full reasons, examples and steps in your working to communicate your mathematics clearly and precisely.

INFORMATION

- The total mark for this paper is 36.
- The number of marks for each question or part question is shown in brackets [].

This document has **12** pages. Any blank pages are indicated.



Answer **all** the questions.

INVESTIGATION

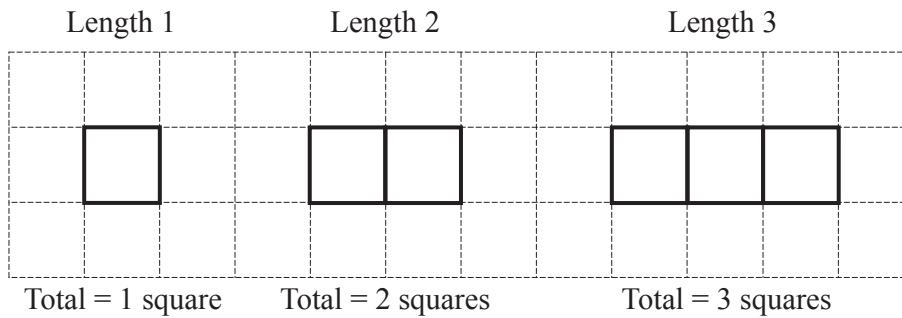
SQUARES IN RECTANGLES

This investigation looks at finding the total number of squares inside a rectangle drawn on a grid.

In this investigation:

- the sides of the rectangles are on the grid lines
- the length of a rectangle is never less than its width.

1 Rectangles of width 1



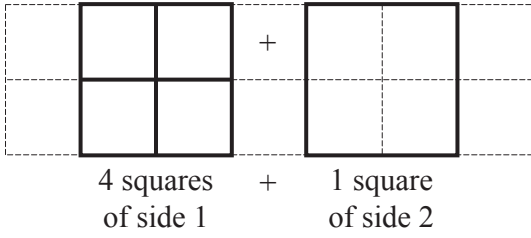
Complete the statements.

The number of squares in a rectangle of width 1 and length 4 is

The number of squares in a rectangle of width 1 and length L is [2]

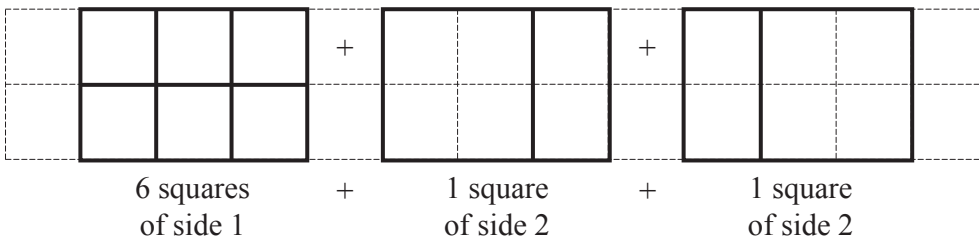
2 Rectangles of width 2

Length 2



Total = 5 squares

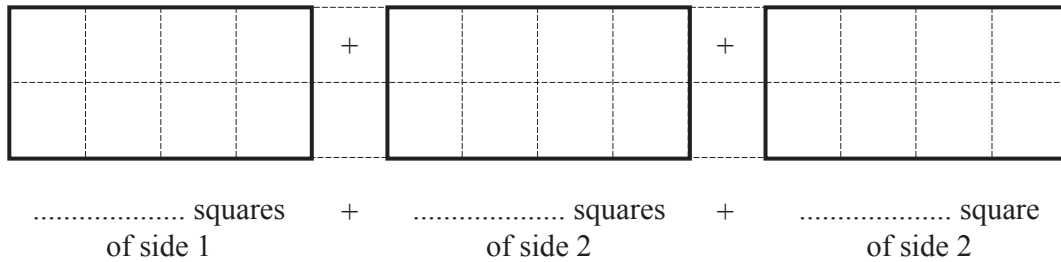
Length 3



Total = 8 squares

- (a) Draw lines on these rectangles and write the number of squares under each one to show there is a total of 11 squares.


Length 4



Total = 11 squares [3]

- (b) (i) Complete the table.
You may use the grid below the table to help you.

Rectangles of width 2	
Length of rectangle	Total number of squares
2	5
3	8
4	11
5	



[2]

- (ii) Find the total number of squares inside a rectangle of width 2 and length 8.

..... [2]

- (c) Can a rectangle of width 2 have a total of exactly 30 squares inside?
Show how you decide.

..... [1]

- (d) (i) Find an expression, in terms of L , for the total number of squares in a rectangle of width 2 and length L .

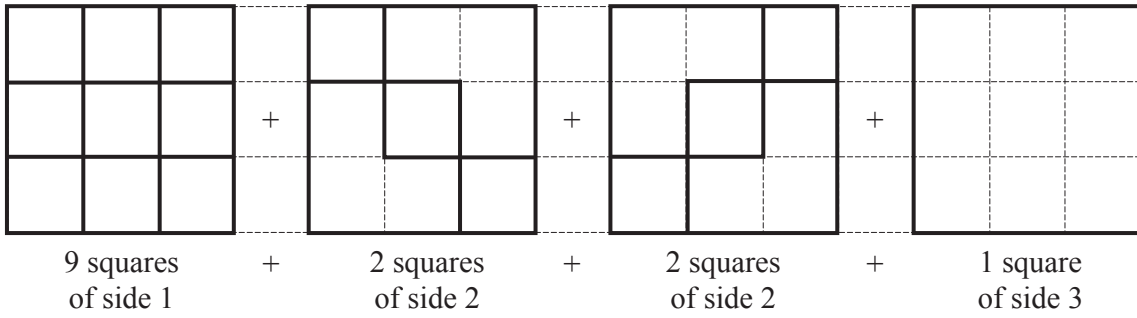
..... [2]

- (ii) Calculate the total number of squares in a rectangle of width 2 and length 170.

..... [2]

3 Rectangles of width 3

Length 3

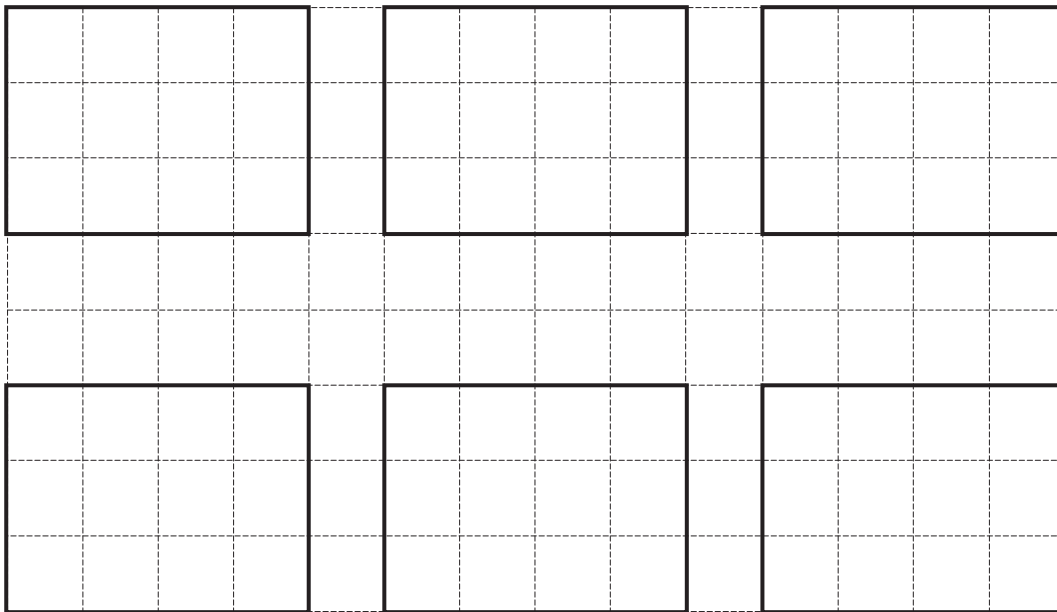


Total = 14 squares

- (a) Draw lines on these rectangles and write the number of squares under each one to find the total number of squares in a rectangle of width 3 and length 4.

You may not need to use all the rectangles.


Length 4



..... [4]

- (b) (i) Complete the table.
You may use the grid to help you.

Rectangles of width 3	
Length of rectangle	Total number of squares
3	14
4	
5	26
6	32
7	



[2]

- (ii) Find an expression, in terms of L , for the number of squares in a rectangle of width 3 and length L .

..... [2]

4 This is another method to count squares in rectangles.

Step A	Multiply the width by the length of the rectangle	1st product
Step B	Subtract 1 from the width and 1 from the length and multiply	2nd product
Step C	Repeat step B until the width is 1	
Step D	Add together all the products	

Example

Rectangle of width 3 and length 5

Step A	3×5	1st product = 15
Step B	$(3 - 1) \times (5 - 1) = 2 \times 4$	2nd product = 8
Step C	$(2 - 1) \times (4 - 1) = 1 \times 3$	3rd product = 3
	Width is now 1 so move to step D	
Step D	$15 + 8 + 3 = 26$	

(a) Use this method to show that the total number of squares in a rectangle of width 4 and length 4 is 30.

[2]

(b) (i) Complete the table.

Rectangles of width 4	
Length of rectangle	Total number of squares
4	30
5	
6	
7	
8	70

[3]

(ii) Find an expression, in terms of L , for the number of squares in a rectangle of width 4 and length L .

..... [2]

5 (a) Complete the table.

Use your answers to **Question 1**, **Question 2(d)(i)**, **Question 3(b)(ii)** and **Question 4(b)(ii)** to help you.

Width of rectangle	Expression for total number of squares in terms of L
1	
2	
3	
4	
5	
6	$21L - 35$

[3]

- (b) Find all the rectangles that have a total of 50 squares.
Give the length and width of each rectangle.

[4]

BLANK PAGE

Permission to reproduce items where third-party owned material protected by copyright is included has been sought and cleared where possible. Every reasonable effort has been made by the publisher (UCLES) to trace copyright holders, but if any items requiring clearance have unwittingly been included, the publisher will be pleased to make amends at the earliest possible opportunity.

To avoid the issue of disclosure of answer-related information to candidates, all copyright acknowledgements are reproduced online in the Cambridge Assessment International Education Copyright Acknowledgements Booklet. This is produced for each series of examinations and is freely available to download at www.cambridgeinternational.org after the live examination series.

Cambridge Assessment International Education is part of Cambridge Assessment. Cambridge Assessment is the brand name of the University of Cambridge Local Examinations Syndicate (UCLES), which is a department of the University of Cambridge.