



Cambridge IGCSE™

CANDIDATE
NAME

CENTRE
NUMBER

--	--	--	--	--

CANDIDATE
NUMBER

--	--	--	--



PHYSICAL EDUCATION

0413/11

Paper 1 Theory

October/November 2020

1 hour 45 minutes

You must answer on the question paper.

No additional materials are needed.

INSTRUCTIONS

- Answer **all** questions.
- Use a black or dark blue pen. You may use an HB pencil for any diagrams or graphs.
- Write your name, centre number and candidate number in the boxes at the top of the page.
- Write your answer to each question in the space provided.
- Do **not** use an erasable pen or correction fluid.
- Do **not** write on any bar codes.
- You may use a calculator.
- You should show all your working and use appropriate units.

INFORMATION

- The total mark for this paper is 100.
- The number of marks for each question or part question is shown in brackets [].

This document has **20** pages. Blank pages are indicated.

1 State **two** muscle fibre types.

1

2

[2]

2 (a) Name a global sporting event.

..... [1]

(b) Describe the advantages of being the host nation of a global event.

.....

.....

.....

.....

.....

.....

.....

.....

.....

..... [5]

[Total: 6]

3 (a) Describe examples of mechanical guidance in **two** different physical activities.

physical activity 1

example 1

.....

physical activity 2

example 2

.....

[2]

(b) (i) Identify the first stage and the final stage of learning.

first stage

final stage

[2]

(ii) Suggest how the way a coach gives feedback may differ between performers in the first stage of learning and performers in the final stage of learning.

.....

.....

.....

.....

.....

.....

.....

[3]

(iii) State how intrinsic feedback benefits a performer in the final stage of learning.


.....

.....

[1]

[Total: 8]

4 (a) The diagrams show a basketball player at different stages of shooting.



(i) State the type of movement that occurs from diagram **A** to diagram **B** at each of the following joints:

shoulder joint

elbow joint.

[2]

(ii) Describe the antagonistic muscle action that creates the type of movement occurring at the elbow joint from diagram **A** to diagram **B**.

.....
.....
.....
.....
.....
.....
.....
.....
..... [4]

(b) (i) Name the type of synovial joint at each of the following:

shoulder joint

elbow joint.

[2]

(ii) Name **three** components of a synovial joint and describe a different function of each component.

component 1

function

.....

component 2

function

.....

component 3

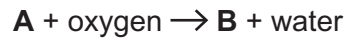
function

.....

[6]

[Total: 14]

5 (a) The equation summarises how energy is released by aerobic respiration.



Name substances **A** and **B**.

A

B

[2]

(b) Name **one** physical activity that uses mainly aerobic respiration and **one** physical activity that uses mainly anaerobic respiration. Give **two** justifications for each physical activity.

mainly aerobic respiration

physical activity

justification 1

.....

justification 2

.....

mainly anaerobic respiration

physical activity

justification 1

.....

justification 2

.....

[4]

[Total: 6]

6 (a) The photograph shows a table tennis player.



(i) Describe how each of the following stages of information processing affect the movements made by the player:

input

.....

decision making

.....

feedback

.....

[3]

(ii) Explain the concept of the single-channel hypothesis and how it might affect the table tennis player.

.....
.....
.....
.....
.....
..... [2]

(b) Describe **two** differences between short-term memory and long-term memory.

1
.....
2
..... [2]

[Total: 7]

7 Describe **three** ways the recreational activities a young person takes part in may be influenced by their family.

1
.....
2
.....
3
..... [3]

8 The table shows a training session for a performer trying to improve their fitness.

training session
warm up, followed by:
1 minute of jogging on the spot
1 minute of wall push-ups
1 minute of jumping jacks
1 minute of shuttle runs
1 minute of static cycling
1 minute of sit-ups
1 minute of leg raises
1 minute of walking lunges
1 minute of skipping with a rope
1 minute of rest then repeat the exercises
then cool down
Complete the training session once per week for 3 weeks.

(a) Identify the training method shown in the table.

..... [1]

(b) Suggest **two** reasons why this training method should benefit a performer trying to improve their fitness.

1

.....

2

.....

[2]

(c) Describe how **three** named principles of overload could be applied to the training programme shown.

principle 1

application

.....

principle 2

application

.....

principle 3

application

.....

[6]

(d) State **three** dangers of overtraining for the performer.

1

2

3

[3]

[Total: 12]

9 (a) Describe the role of each of the following structures in the pathway of blood through the heart:

vena cava

.....

pulmonary vein

.....

aorta

.....

pulmonary artery.

.....

[4]

(b) Describe **two** long-term effects of exercise on the heart.

1

.....

2


.....

[2]

[Total: 6]

10 (a) The diagram shows a sprinter at the start of a race.

(i) Draw an **X** on the diagram to show the location of a gastrocnemius muscle.



[1]

(ii) Identify **two** forces and explain how each force acts on the sprinter as they start the race.

force 1

explanation

.....

force 2

explanation

.....

[4]

(b) Describe **three** benefits for a sprinter of a warm up.

1

.....

2

.....

3

.....

[3]

[Total: 8]

11 Tendon injuries can occur when participating in physical activities.

(a) Describe **one** function of a tendon.

.....
..... [1]

(b) Describe **two** possible causes of a tendon injury during physical activity.

1

.....

2

..... [2]

(c) The RICE method of treatment is often used to treat tendon injuries.

Describe a different benefit that each of the following parts of the RICE method provides:

rest

.....

ice

.....

compression.

..... [3]

[Total: 6]

- 12 Complete the table to show different types of prohibited performance-enhancing drug (PED) and a different benefit of each type of PED on performance for each physical activity.

physical activity	type of PED	benefit on performance
shot put		
golf		
sprinting		

[6]

13 (a) Describe what is meant by the term $VO_2 \text{ max}$.

.....

.....

.....

..... [2]

(b) The table shows the $VO_2 \text{ max}$ for some inactive people and for some performers in certain physical activities.

activity	inactive		distance runner		shot putter	
gender	male	female	male	female	male	female
$VO_2 \text{ max}$ /ml per kg per minute	56.0	40.4	76.5	68.0	56.0	41.0

(i) Identify the individual with the highest $VO_2 \text{ max}$.

individual's gender

individual's activity [1]

(ii) Suggest **one** reason why the inactive individuals and the shot putters have similar $VO_2 \text{ max}$ levels.

.....

..... [1]

(c) State **three** factors, other than gender, that affect $VO_2 \text{ max}$ levels.

1

2

3 [3]

[Total: 7]

14 (a) Describe, from a named physical activity, examples of each of the following characteristics of a skilled performance.

physical activity

fluent

.....

consistent

.....

accurate

.....

goal-directed

.....

[4]

(b) Describe an example of an open skill and an example of a closed skill in a named physical activity.

physical activity

open skill

.....

closed skill

.....

[2]

[Total: 6]

15 SMARTER goals should be measurable.

(a) Name **two** other goal-setting principles.

1

2

[2]

(b) Give an example of a measurable goal in a named physical activity.

physical activity

example

.....

[1]

[Total: 3]

BLANK PAGE

Permission to reproduce items where third-party owned material protected by copyright is included has been sought and cleared where possible. Every reasonable effort has been made by the publisher (UCLES) to trace copyright holders, but if any items requiring clearance have unwittingly been included, the publisher will be pleased to make amends at the earliest possible opportunity.

To avoid the issue of disclosure of answer-related information to candidates, all copyright acknowledgements are reproduced online in the Cambridge Assessment International Education Copyright Acknowledgements Booklet. This is produced for each series of examinations and is freely available to download at www.cambridgeinternational.org after the live examination series.

Cambridge Assessment International Education is part of the Cambridge Assessment Group. Cambridge Assessment is the brand name of the University of Cambridge Local Examinations Syndicate (UCLES), which itself is a department of the University of Cambridge.