



# Cambridge IGCSE™

## PHYSICS

Paper 2 Multiple Choice (Extended)

0625/22

May/June 2023

45 minutes

You must answer on the multiple choice answer sheet.

You will need: Multiple choice answer sheet  
Soft clean eraser  
Soft pencil (type B or HB is recommended)

## INSTRUCTIONS

- There are **forty** questions on this paper. Answer **all** questions.
- For each question there are four possible answers **A**, **B**, **C** and **D**. Choose the **one** you consider correct and record your choice in soft pencil on the multiple choice answer sheet.
- Follow the instructions on the multiple choice answer sheet.
- Write in soft pencil.
- Write your name, centre number and candidate number on the multiple choice answer sheet in the spaces provided unless this has been done for you.
- Do **not** use correction fluid.
- Do **not** write on any bar codes.
- You may use a calculator.
- Take the weight of 1.0 kg to be 9.8 N (acceleration of free fall =  $9.8 \text{ m/s}^2$ ).

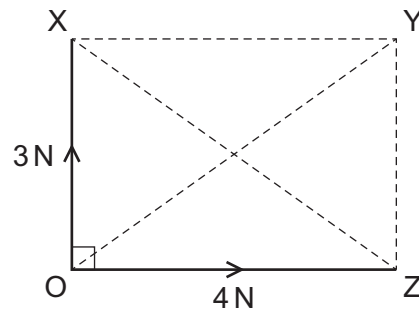
## INFORMATION

- The total mark for this paper is 40.
- Each correct answer will score one mark.
- Any rough working should be done on this question paper.

This document has **16** pages. Any blank pages are indicated.



- 1 Forces of 3 N and 4 N act at right angles, as shown.



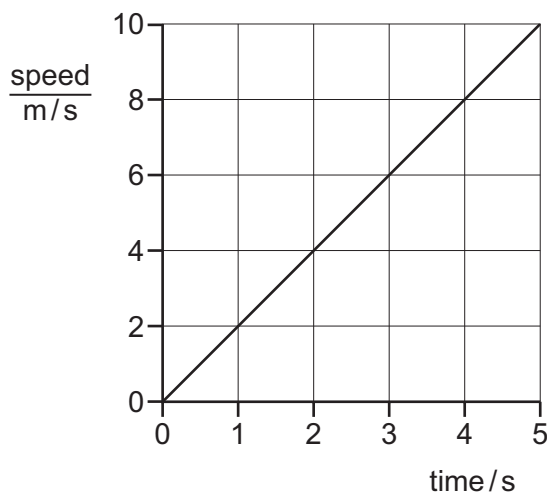
What is the resultant force?

- A** 1 N along XZ  
**B** 5 N along XZ  
**C** 5 N along OY  
**D** 7 N along OY
- 2 A light ball is held at rest at the top of a tall cliff. It is released and falls through the air, eventually reaching its terminal velocity.

Which row describes the behaviour of the ball as it descends?

	the initial acceleration of the ball	the final acceleration of the ball
<b>A</b>	0	0
<b>B</b>	0	$g$
<b>C</b>	$g$	0
<b>D</b>	$g$	$g$

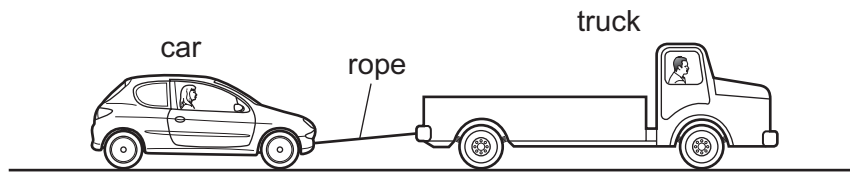
- 3 The graph represents the motion of a car.



How far has the car moved between 0 and 5 s?

- A** 2 m                      **B** 10 m                      **C** 25 m                      **D** 50 m
- 4 Which statement about mass or weight is **not** correct?
- A** Masses can be compared using a balance.  
**B** Mass is a force.  
**C** Weights can be compared using a balance.  
**D** Weight is a force.
- 5 A sphere P, made of steel, has a weight of 10 N on Earth.  
 Another sphere Q, also made of steel, has a weight of 10 N on Mars.  
 The gravitational field strength on Earth is greater than the gravitational field strength on Mars.  
 Which statement is correct?
- A** The mass of sphere P is the same as the mass of sphere Q.  
**B** The mass of sphere P is less than the mass of sphere Q.  
**C** On Mars, the weight of sphere P is the same as the weight of sphere Q.  
**D** On Earth, the weight of sphere Q is less than 10 N.
- 6 Which two quantities must be known to determine the density of a material?
- A** mass and area  
**B** mass and volume  
**C** weight and area  
**D** weight and volume

- 7 A truck is towing a car along a straight horizontal road at a constant speed.



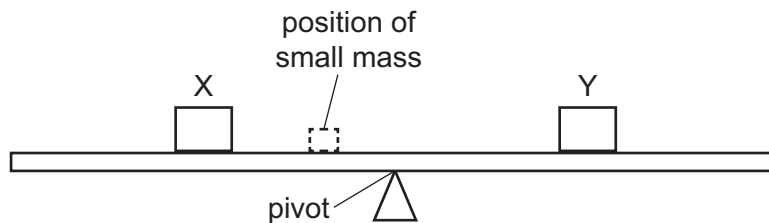
The rope breaks.

Which row gives the direction of the initial acceleration of the truck after the rope breaks and the reason for the acceleration?

	direction of acceleration of the truck	reason
<b>A</b>	left	the driving force is greater than the resistive forces on the truck
<b>B</b>	left	the driving force is smaller than the resistive forces on the truck
<b>C</b>	right	the driving force is greater than the resistive forces on the truck
<b>D</b>	right	the driving force is smaller than the resistive forces on the truck

- 8 A uniform beam is pivoted at the centre and two identical masses, X and Y, are placed so that the beam balances.

A smaller mass is then added at the position shown.



How can the masses be positioned so the beam balances again?

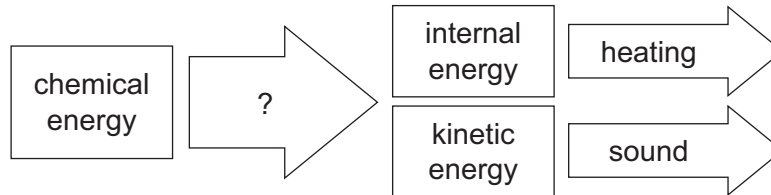
- A** Move X away from the pivot.
- B** Move X towards the pivot.
- C** Move Y towards the pivot.
- D** Move the small mass away from the pivot.

- 9 A resultant force of 2.0 N acts on an object of mass 3.0 kg for 6.0 s.

What is the change in velocity of the object?

- A 0.25 m/s      B 1.0 m/s      C 4.0 m/s      D 36 m/s

- 10 The diagram shows the energy stores for a mobile (cell) phone and how the energy is transferred between stores.



What describes how the chemical energy is transferred?

- A electrical work done  
 B mechanical work done  
 C electromagnetic waves  
 D sound waves
- 11 A wind turbine is 30% efficient and has an output of 2.5 MW of electrical power.  
 What is the power input to the turbine?  
 A 0.75 MW      B 8.3 MW      C 75 MW      D 83 MW
- 12 Which two physical quantities must be used to calculate the power developed by a student running up a flight of steps?  
 A force exerted and the vertical height of the steps only  
 B force exerted and the time taken only  
 C work done and the vertical height of the steps only  
 D work done and the time taken only

- 13 The density of sea water is  $1030 \text{ kg/m}^3$ .

The gravitational field strength on the Earth is  $9.8 \text{ N/kg}$ .

Atmospheric pressure is  $101\,000 \text{ Pa}$ .

At which depth in sea water is the total pressure due to the atmosphere and the water equal to  $513\,000 \text{ Pa}$ ?

- A 40.8 m      B 50.8 m      C 400 m      D 498 m

**14** Four students describe the phrase ‘absolute zero’ during a lesson on the particle model.

Which student is correct?

- A** This is the lowest possible temperature.
- B** Particles in a solid start vibrating.
- C** Particles do not have any weight.
- D** Particles have the least gravitational potential energy.

**15** Four students are asked to state and explain the relative magnitudes of the thermal expansion of solids and gases.

Which student is correct?

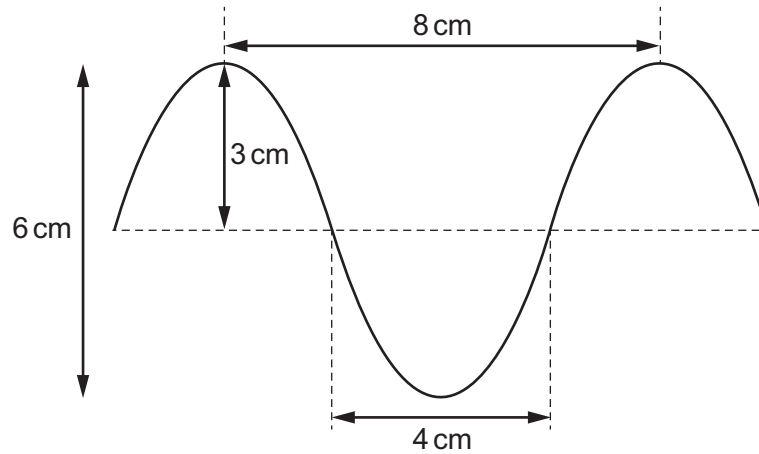
- A** Gases expand more than solids because the molecules in a gas are in random motion.
- B** Gases expand more than solids because the attractive forces between molecules are much weaker in gases.
- C** Solids expand more than gases because the molecules are closer together in solids.
- D** Solids expand more than gases because the molecules in a solid are in a regular pattern.

**16** Four cups **A**, **B**, **C** and **D** contain hot coffee.

Which cup keeps the coffee warm the longest?

	the outside surface of the cup	the top of the cup
<b>A</b>	black	covered with a lid
<b>B</b>	black	no lid
<b>C</b>	white	covered with a lid
<b>D</b>	white	no lid

17 The diagram shows a wave.



What are the amplitude and the wavelength of this wave?

	amplitude / cm	wavelength / cm
<b>A</b>	3	4
<b>B</b>	3	8
<b>C</b>	6	4
<b>D</b>	6	8

18 Optical fibres are used to transmit digital signals using infrared radiation.

The average refractive index of the fibres is 1.50.

Which row describes a digital signal and gives the speed of infrared radiation in the fibres?

	digital signal	<u>speed of infrared radiation in the fibres</u> m/s
<b>A</b>	a signal that consists of only two values	$2.0 \times 10^8$
<b>B</b>	a signal that consists of only two values	$4.5 \times 10^8$
<b>C</b>	a signal that consists of a continuous range of values	$2.0 \times 10^8$
<b>D</b>	a signal that consists of a continuous range of values	$4.5 \times 10^8$

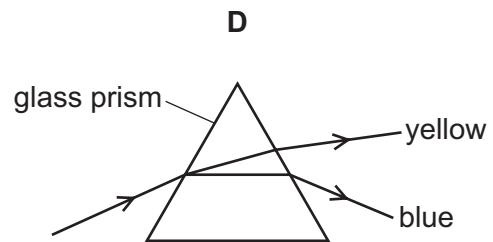
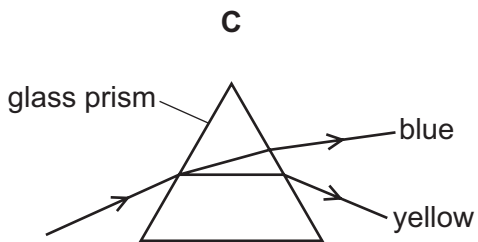
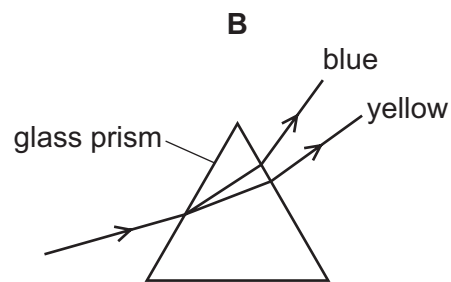
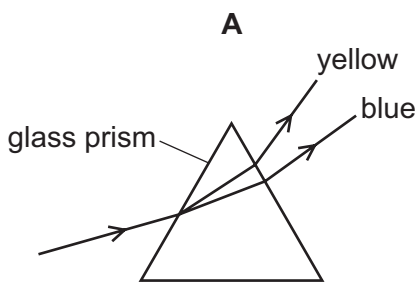
19 Which statement describes monochromatic light?

- A light of a single frequency
- B light transmitted by a transparent prism
- C visible light
- D white light

20 A beam of light consists of yellow and blue light.

The beam of light is incident on a glass prism.

Which diagram is correct?



21 A radio station broadcasts a signal with a frequency of 89 MHz.

What is the wavelength of this signal?

- A  $3.7\ \mu\text{m}$
- B 3.4 m
- C 3.7 km
- D 3.4 Mm

22 A boy shouts and hears the echo from a tall building 2.2 s later.

The speed of sound in air is 330 m/s.

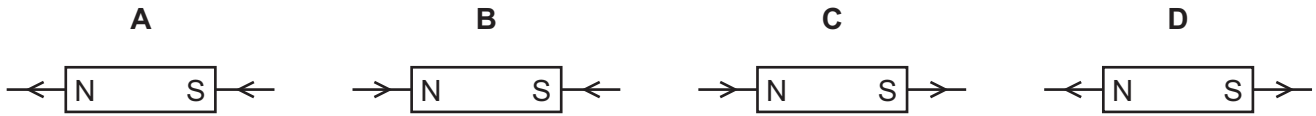
How far away from the boy is the building?

- A 150 m
- B 300 m
- C 360 m
- D 730 m



23 The magnetic field of a bar magnet can be represented by magnetic field lines.

Which diagram shows two magnetic field lines correctly?



24 A plastic rod is rubbed with a dry cloth. The rod becomes positively charged.

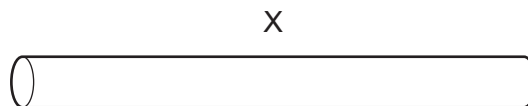
Why has the rod become positively charged?

- A It has gained electrons.
- B It has gained neutrons.
- C It has lost electrons.
- D It has lost neutrons.

25 Which statement about electric current in a conductor is correct?

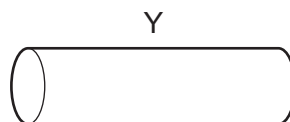
- A In a d.c. circuit, the electric current gradually decreases along the conductor.
- B In a d.c. circuit, the free electrons flow back and forth.
- C In an a.c. circuit, the electric current remains exactly the same all the time.
- D In an a.c. circuit, the flow of charge changes direction continually.

26 A piece of metal wire X with a uniform diameter has resistance  $R$ .



A second piece of wire Y is made of the same metal and has a uniform diameter.

Y has double the cross-sectional area of X and half the length of X.



What is the resistance of Y?

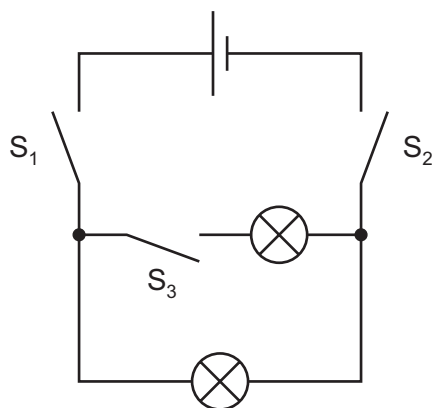
- A  $\frac{R}{4}$
- B  $\frac{R}{2}$
- C  $R$
- D  $4R$

27 An electric fire is connected to a 240 V supply and transfers energy at a rate of 1.0 kW.

How much charge passes through the fire in 1.0 h?

- A 42 C                      B 250 C                      C  $1.5 \times 10^4$  C                      D  $2.4 \times 10^5$  C

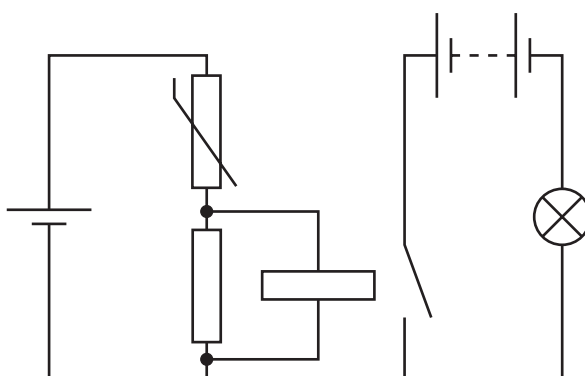
28 Two lamps are connected in parallel.



Which switches must be closed so that both lamps light?

- A  $S_1$  and  $S_2$  only  
 B  $S_1$  and  $S_3$  only  
 C  $S_2$  and  $S_3$  only  
 D  $S_1$ ,  $S_2$  and  $S_3$

29 The diagram shows a circuit that switches on a lamp when there is a change in the environment.



Which change in the environment causes the lamp to be switched on?

- A a decrease in light intensity  
 B a decrease in temperature  
 C an increase in light intensity  
 D an increase in temperature

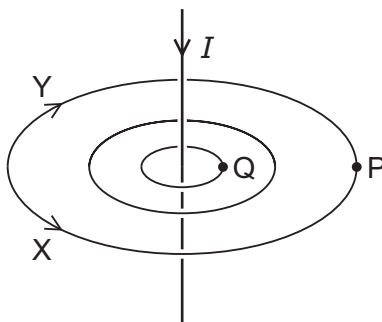
- 30 A step-down transformer is 100% efficient. It has an input voltage of 240V a.c. and an output voltage of 60V a.c.

The current in the primary coil is 0.50 A.

What is the current in the secondary coil?

- A 0.13 A      B 0.50 A      C 2.0 A      D 8.0 A

- 31 The diagram shows the pattern of the magnetic field due to the current  $I$  in a straight wire.



Which row is correct?

	direction of field	relative strength of field
A	X	greater at P than Q
B	Y	greater at P than Q
C	X	greater at Q than P
D	Y	greater at Q than P

- 32 In which device is the magnetic effect of a current **not** used?

- A electromagnet  
 B loudspeaker  
 C potential divider  
 D relay

33 Fission and fusion are two types of nuclear process.

How does the total mass of the nuclides produced compare with the total mass of the original nuclide or nuclides in these nuclear processes?

	total mass of fission products compared to original nuclide	total mass of fusion products compared to original nuclides
<b>A</b>	same	same
<b>B</b>	more	less
<b>C</b>	less	more
<b>D</b>	less	less

34 The table shows the composition of three different nuclei.

nucleus	number of protons	number of neutrons
X	3	3
Y	3	4
Z	4	3

Which nuclei are isotopes of the same element?

**A** X, Y and Z    **B** X and Y only    **C** X and Z only    **D** Y and Z only

35 Which change occurs in the nucleus of a radioactive atom during  $\beta$ -emission?

- A** A neutron transforms into a proton and an electron.
- B** A neutron transforms into a proton only.
- C** A proton transforms into a neutron and an electron.
- D** A proton transforms into a neutron only.

36 A radioactive isotope has a half-life of 8 days.

A detector close to a sample of this isotope gives a count rate of 200 counts per minute.

Without the source, the background count is 20 counts per minute.

What is the count rate due to the source after 8 days?

- A 80 counts per minute
- B 90 counts per minute
- C 100 counts per minute
- D 110 counts per minute

37 Which statement about the Solar System is correct?

- A All the planets are rocky.
- B Only the Earth has a moon.
- C Pluto is a dwarf planet.
- D There are many stars in the Solar System.

38 Comets are bodies which orbit the Sun in the Solar System.

What is the shape of the orbit and how is the Sun positioned within the orbit?

	shape of orbit	position of the Sun
<b>A</b>	circular	centre of orbit
<b>B</b>	circular	<b>not</b> at centre of orbit
<b>C</b>	elliptical	centre of orbit
<b>D</b>	elliptical	<b>not</b> at centre of orbit

39 Which nuclear reaction produces the release of energy to power a star?

- A nuclear fission of helium into hydrogen
- B nuclear fission of hydrogen into helium
- C nuclear fusion of helium into hydrogen
- D nuclear fusion of hydrogen into helium

40 What is the definition of the Hubble constant?

- A the ratio of the speed at which a galaxy is receding from the Earth to its distance from the Earth
- B the value of the change in wavelength of the galaxy's starlight due to redshift
- C the constant used to represent the rate of expansion of the Universe in all directions
- D the estimated constant equal to the age of the Universe



**BLANK PAGE**

---

Permission to reproduce items where third-party owned material protected by copyright is included has been sought and cleared where possible. Every reasonable effort has been made by the publisher (UCLES) to trace copyright holders, but if any items requiring clearance have unwittingly been included, the publisher will be pleased to make amends at the earliest possible opportunity.

To avoid the issue of disclosure of answer-related information to candidates, all copyright acknowledgements are reproduced online in the Cambridge Assessment International Education Copyright Acknowledgements Booklet. This is produced for each series of examinations and is freely available to download at [www.cambridgeinternational.org](http://www.cambridgeinternational.org) after the live examination series.

Cambridge Assessment International Education is part of Cambridge Assessment. Cambridge Assessment is the brand name of the University of Cambridge Local Examinations Syndicate (UCLES), which is a department of the University of Cambridge.