



**Cambridge Assessment International Education**  
Cambridge International General Certificate of Secondary Education

CANDIDATE  
NAME

--

CENTRE  
NUMBER

--	--	--	--	--

CANDIDATE  
NUMBER

--	--	--	--



**COMBINED SCIENCE**

Paper 6 Alternative to Practical

**0653/61**

**May/June 2019**

**1 hour**

Candidates answer on the Question Paper.

No Additional Materials are required.

**READ THESE INSTRUCTIONS FIRST**

Write your centre number, candidate number and name on all the work you hand in.

Write in dark blue or black pen.

You may use an HB pencil for any diagrams or graphs.

Do not use staples, paper clips, glue or correction fluid.

**DO NOT WRITE IN ANY BARCODES.**

Answer **all** questions.

Electronic calculators may be used.

You may lose marks if you do not show your working or if you do not use appropriate units.

At the end of the examination, fasten all your work securely together.

The number of marks is given in brackets [ ] at the end of each question or part question.

This document consists of **13** printed pages and **3** blank pages.

1 A student investigates the nutrient content of an apple.

(a) Fig. 1.1 shows a photograph of the cut surface of an apple.



**Fig. 1.1**

(i) In the box, make an enlarged detailed drawing of the cut surface of the apple.

- (ii) Use a ruler to measure your drawing, in millimetres, at its widest point and record this value.

width of apple in drawing = ..... mm

Measure the same distance on the photograph in Fig. 1.1 and record this value.

width of apple from photograph = ..... mm  
[1]

- (iii) Calculate the magnification of your drawing.

Show your working.

magnification of drawing = ..... [1]

- (b) Describe how you would test this fruit to show the presence of reducing sugar. Include the observation that shows a positive result.

test .....

.....

.....

.....

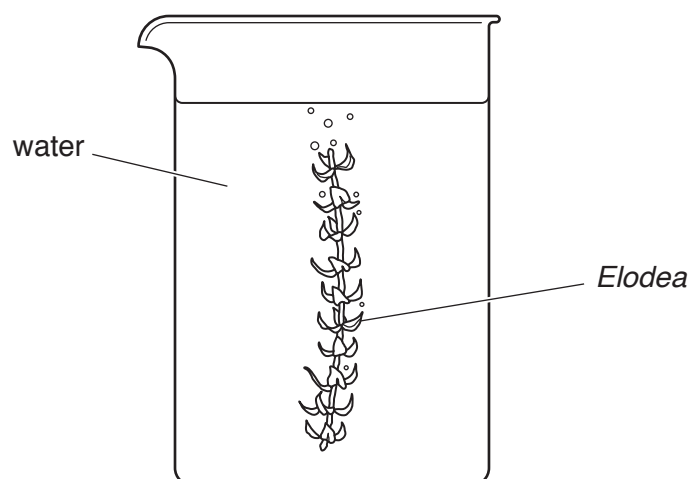
.....

observation for a positive result .....

..... [3]

[Total: 7]

- 2 Fig. 2.1 shows a cut stem of the water plant *Elodea* placed in a beaker of water. When light shines on the *Elodea* it photosynthesises, and bubbles of gas are produced.



**Fig. 2.1**

Plan an investigation to find out how the rate of photosynthesis of *Elodea* is affected by the brightness of the light.

In your answer, include:

- the apparatus needed, including a labelled diagram if you wish
- a brief description of the method, including how you will treat variables and any safety precautions
- the measurements you will make
- how you will process your results
- how you will use your results to draw a conclusion.



- 3 A student investigates the temperature change which occurs when aqueous copper(II) sulfate reacts separately with excess magnesium and with excess zinc.

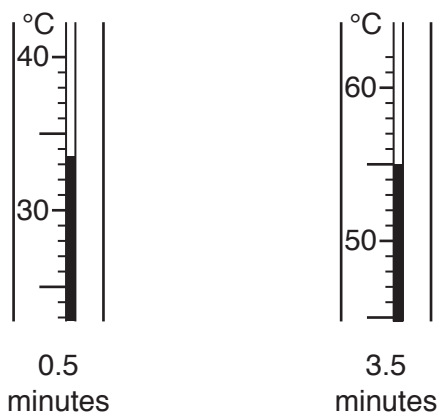
**(a) Method**

- Using a measuring cylinder the student places 25 cm<sup>3</sup> aqueous copper(II) sulfate into a small glass beaker.
- She measures the temperature of the aqueous copper(II) sulfate and records it in Table 3.1 to the nearest 0.5 °C for time = 0.
- She starts the stop-clock and immediately adds 2g magnesium powder, an excess, to the beaker and stirs.
- She measures the temperature every 30 seconds for 4 minutes. She records the temperatures, to the nearest 0.5 °C, in Table 3.1.

**Table 3.1**

reaction with magnesium	
time / min	temperature / °C
0	20.0
0.5	
1.0	47.0
1.5	60.0
2.0	60.0
2.5	58.0
3.0	56.5
3.5	
4.0	53.0

Fig. 3.1 shows the thermometer scales for the temperatures at 0.5 and 3.5 minutes.

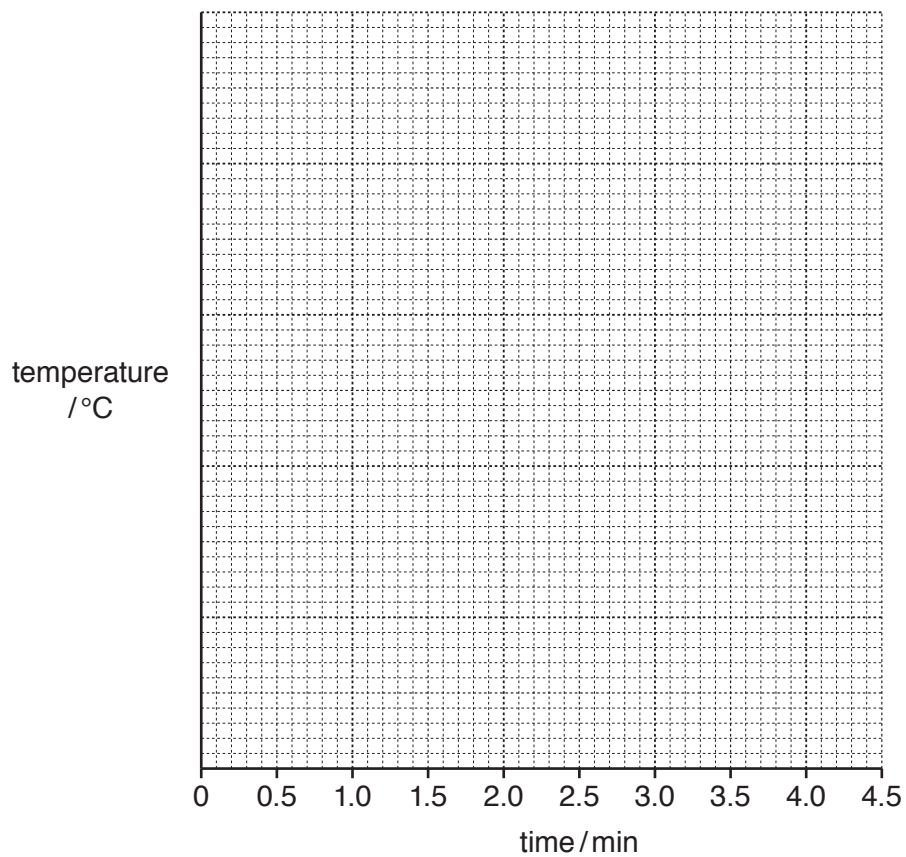


**Fig. 3.1**

Read the temperatures to the nearest 0.5 °C and record them in Table 3.1.

[2]

- (b) (i) On the grid provided plot a graph of temperature (vertical axis) against time.



[2]

- (ii) Draw a best-fit straight line for the **increasing** temperatures. Extend the line further than the highest point. Label the line magnesium.

Draw a best-fit line through the **decreasing** temperatures. Extend the line back past the highest point. [1]

- (iii) The maximum temperature reached by the reaction is where the two lines cross.

State the maximum temperature reached by the reaction.

maximum temperature = ..... °C [1]

- (c) Suggest a value for the maximum temperature reached if 5g magnesium powder is reacted with 25 cm<sup>3</sup> of the same copper(II) sulfate solution.

maximum temperature = ..... °C [1]

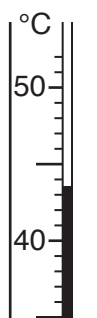
- (d) She then repeats the experiment using 2g zinc powder, an excess, instead of magnesium powder.

She records the temperatures in Table 3.2.

**Table 3.2**

reaction with zinc	
time/mins	temperature/°C
0	20.0
0.5	29.5
1.0	38.0
1.5	45.0
2.0	45.0
2.5	
3.0	41.5
3.5	40.0
4.0	38.0

- (i) Fig. 3.2 shows the thermometer scale for the temperature at 2.5 minutes.



2.5 minutes

**Fig. 3.2**

Read the temperature to the nearest 0.5°C and record it in Table 3.2. [1]

- (ii) Repeat (b) for the results for zinc. Draw the graph on the same grid as that used for magnesium.  
Label this graph zinc.

State the maximum temperature reached by this reaction.

maximum temperature = ..... °C [2]



- (e) Suggest why the maximum temperature for magnesium is different from the maximum temperature for zinc.

.....  
..... [1]

- (f) (i) State the name of a piece of apparatus which could be used to measure the volume of copper(II) sulfate more accurately.

..... [1]

- (ii) Suggest **and** explain **one** other improvement to the **apparatus** that would increase the accuracy of the maximum temperature for the reactions.

improvement .....

explanation .....

..... [1]

[Total: 13]

- 4 A student calculates the density of a liquid using two different methods.

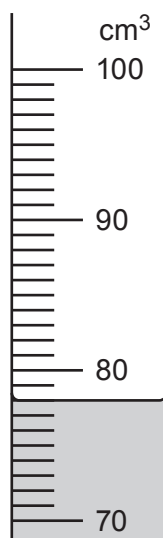
**Method 1**

- (a) He measures the mass  $m_c$  of an empty measuring cylinder.

$$m_c = 102.31 \text{ g}$$

He adds approximately  $75 \text{ cm}^3$  of the liquid to the measuring cylinder.

- (i) Fig. 4.1 shows part of the measuring cylinder scale.



**Fig. 4.1**

Read and record the volume  $V_L$  of the liquid to the nearest  $0.5 \text{ cm}^3$ .

$$V_L = \dots\dots\dots \text{ cm}^3 \quad [1]$$

- (ii) State how parallax (line of sight) errors are avoided when using a measuring cylinder.

.....  
 ..... [1]

- (iii) He measures and records the total mass of the measuring cylinder and liquid.

$$\text{total mass} = 189.00 \text{ g}$$

Determine the mass  $m_L$  of the liquid. Use the equation shown.

$$m_L = \text{total mass} - m_c$$

$$m_L = \dots\dots\dots \text{ g} \quad [1]$$

- (iv) Calculate the density  $\rho_L$  of the liquid. Use your answers in (a)(i) and (a)(iii) and the equation shown.

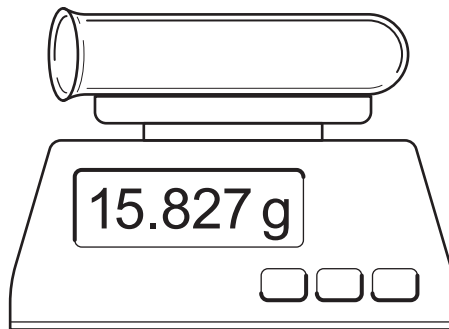
Record your answer to a suitable number of significant figures.

$$\rho_L = \frac{m_L}{V_L}$$

$$\rho_L = \dots\dots\dots \text{ g/cm}^3 \text{ [2]}$$

**Method 2**

- (b) (i) The student measures the mass  $m_t$  of a test-tube. Fig. 4.2 shows the balance reading.

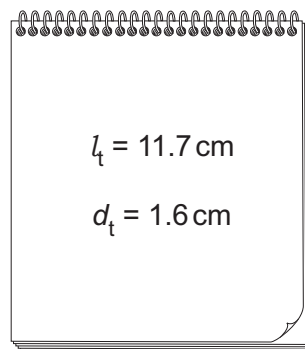


**Fig. 4.2**

Read and record the mass of the test-tube to the nearest 0.01 g.

$$m_t = \dots\dots\dots \text{ g [1]}$$

- (ii) He also measures the length  $l_t$  and the diameter  $d_t$  of the test-tube. His results are shown in Fig. 4.3.



**Fig. 4.3**

Use the student's values of  $l_t$  and  $d_t$  to calculate the volume  $V_t$  of the test-tube. Use the equation shown:

$$V_t = 0.79 \times d_t^2 \times l_t$$

$$V_t = \dots\dots\dots \text{ cm}^3 \text{ [1]}$$

- (iii) Calculate the density  $\rho_t$  of the test-tube. Use your answers to (b)(i) and (b)(ii) and the equation shown:

$$\rho_t = \frac{m_t}{V_t}$$

$$\rho_t = \dots\dots\dots \text{ g/cm}^3 \text{ [1]}$$

- (iv) The student lowers the test-tube into a measuring cylinder containing the liquid until it floats, as shown in Fig. 4.4.

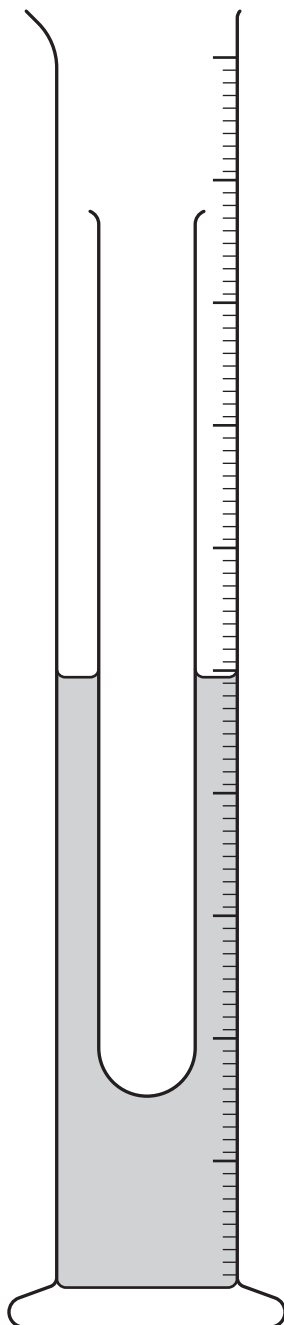


Fig. 4.4

Use a ruler to measure the length  $l_b$  of the test-tube, to the nearest 0.1 cm, that is below the surface of the liquid.

$$l_b = \dots\dots\dots \text{ cm [1]}$$

- (v) Calculate the density  $\rho_L$  of the liquid. Use the data in (b)(ii) and your answers to (b)(iii) and (b)(iv) and the equation shown:

$$\rho_L = \frac{\rho_t \times l_t}{l_b}$$

$\rho_L = \dots\dots\dots$  g/cm<sup>3</sup> [1]

- (c) Compare the values of  $\rho_L$  that you calculated in (a)(iv) and (b)(v).

State whether your two values of  $\rho_L$  agree, within the limits of experimental error. Explain your answer with reference to the data.

.....  
 ..... [1]

- (d) **Method 2** assumes that the test-tube is a perfect cylinder.

- (i) Use Fig. 4.4 to explain why this assumption is incorrect.

.....  
 ..... [1]

- (ii) State what effect this assumption will have on:

1. the calculated volume  $V_t$  of the test-tube

.....  
 .....

2. the calculated value of the density  $\rho_L$  of the liquid.

.....  
 ..... [1]

[Total: 13]





**BLANK PAGE**

---

Permission to reproduce items where third-party owned material protected by copyright is included has been sought and cleared where possible. Every reasonable effort has been made by the publisher (UCLES) to trace copyright holders, but if any items requiring clearance have unwittingly been included, the publisher will be pleased to make amends at the earliest possible opportunity.

To avoid the issue of disclosure of answer-related information to candidates, all copyright acknowledgements are reproduced online in the Cambridge Assessment International Education Copyright Acknowledgements Booklet. This is produced for each series of examinations and is freely available to download at [www.cambridgeinternational.org](http://www.cambridgeinternational.org) after the live examination series.

Cambridge Assessment International Education is part of the Cambridge Assessment Group. Cambridge Assessment is the brand name of the University of Cambridge Local Examinations Syndicate (UCLES), which itself is a department of the University of Cambridge.