



# Cambridge IGCSE™

CANDIDATE  
NAME

|  |
|--|
|  |
|--|

CENTRE  
NUMBER

|  |  |  |  |  |
|--|--|--|--|--|
|  |  |  |  |  |
|--|--|--|--|--|

CANDIDATE  
NUMBER

|  |  |  |  |
|--|--|--|--|
|  |  |  |  |
|--|--|--|--|



**COMBINED SCIENCE**

**0653/61**

Paper 6 Alternative to Practical

**May/June 2021**

**1 hour**

You must answer on the question paper.

No additional materials are needed.

## INSTRUCTIONS

- Answer **all** questions.
- Use a black or dark blue pen. You may use an HB pencil for any diagrams or graphs.
- Write your name, centre number and candidate number in the boxes at the top of the page.
- Write your answer to each question in the space provided.
- Do **not** use an erasable pen or correction fluid.
- Do **not** write on any bar codes.
- You may use a calculator.
- You should show all your working and use appropriate units.

## INFORMATION

- The total mark for this paper is 40.
- The number of marks for each question or part question is shown in brackets [ ].

This document has **16** pages. Any blank pages are indicated.

- 1 A student investigates an enzyme-catalysed reaction.

Hydrogen peroxide is broken down by catalase, an enzyme found in living cells such as the cells of potato tissue. Oxygen gas is released during the reaction.

(a) **Procedure**

The student:

**Step 1** labels three test-tubes, **A**, **B** and **C**

**Step 2** makes up three different concentrations of hydrogen peroxide solution by adding the volumes of 6% hydrogen peroxide solution and water as shown in Table 1.1.

**Table 1.1**

| test-tube | volume of 6% hydrogen peroxide solution /cm <sup>3</sup> | volume of water /cm <sup>3</sup> | percentage concentration of hydrogen peroxide solution |
|-----------|--|----------------------------------|--|
| <b>A</b>  | 2  | 4                                | 2  |
| <b>B</b>  | 4  | 2                                |  |
| <b>C</b>  | 6  | 0                                | 6  |

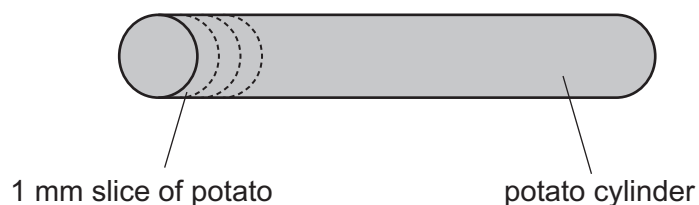
- (i) Calculate the percentage concentration of hydrogen peroxide solution for test-tube **B**.

Record your answer in Table 1.1 **and** Table 1.2.

[1]

- (ii) The student:

**Step 3** cuts three 1 mm slices of potato from a potato cylinder as shown in Fig. 1.1.



**Fig. 1.1**

**Step 4** drops one potato slice into each labelled test-tube and starts the stop-watches

**Step 5** records, in Table 1.2, the time taken for each potato slice to rise to the surface of the liquid.

The times for each potato slice are shown in Fig. 1.2.

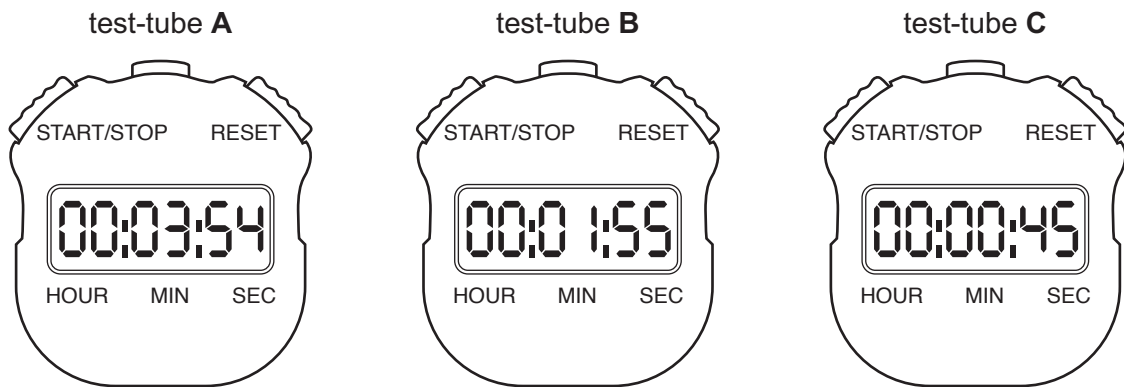


Fig. 1.2

Record in Table 1.2 the results shown in Fig. 1.2. Test-tube **B** has been completed for you.

Table 1.2

| test-tube | percentage concentration of hydrogen peroxide solution | time taken for potato slice to rise to the surface /seconds |
|-----------|--|---|
| <b>A</b>  | 2  |   |
| <b>B</b>  |  | 115   |
| <b>C</b>  | 6  |   |

[2]

(iii) State a conclusion for these results.

.....  
 ..... [1]

(iv) State and explain **one** safety precaution taken when cutting the potato slices.

.....  
 ..... [1]

(v) Identify **two** variables that are controlled in this investigation.

1 .....  
 2 ..... [2]

(vi) Suggest why the experiment is **not** done using 20% concentration of hydrogen peroxide solution.

.....  
..... [1]

(vii) Predict how the results will change if the potato slices are cut to a thickness of 2 mm instead of 1 mm. Explain your answer.

.....  
..... [1]

(b) The student then adds the remaining potato cylinder to some iodine solution. State the nutrient tested for with iodine solution and state the observation for a positive result.

nutrient .....

observation .....

..... [2]

(c) A student tests some potato with Benedict's solution by following the procedure shown in Fig. 1.3.

|        |   |
|--------|---|
| Step 1 | put a piece of potato in a test-tube      |
| Step 2 | add 2 cm <sup>3</sup> Benedict's solution |
| Step 3 | shake the test-tube to mix                |
| Step 4 | .....                                     |
| Step 5 | observe the colour after 3 minutes        |

**Fig. 1.3**

(i) State the instruction for Step 4.

.....  
..... [1]

(ii) State an observation for a positive result.

..... [1]

[Total: 13]



2 A student is provided with five aqueous solutions, **F**, **G**, **H**, **J** and **K**.

- (a) The student puts three drops of Universal Indicator into test-tubes, each containing one of the solutions.

The results are shown in Table 2.1.

**Table 2.1**

| solution | colour with Universal Indicator | pH of solution |
|----------|---------------------------------|----------------|
| <b>F</b> | red                             |                |
| <b>G</b> | green                           |                |
| <b>H</b> | blue-green                      |                |
| <b>J</b> | purple                          |                |
| <b>K</b> | red                             |                |

Use the pH colour chart to determine the pH of each solution.

|                                 |       |        |        |       |            |         |         |
|---------------------------------|-------|--------|--------|-------|------------|---------|---------|
| colour with Universal Indicator | red   | orange | yellow | green | blue-green | blue    | purple  |
| pH                              | 0 – 3 | 4 – 5  | 6      | 7     | 8 – 9      | 10 – 11 | 12 – 14 |

Write your answers in Table 2.1.

[2]

- (b) (i) Put the solutions in order of decreasing acidity and increasing alkalinity.

most acidic .....

↓

.....

.....

.....

.....

.....

most alkaline .....

[1]

- (ii) Explain why it is difficult to decide where to put **F** and **K** in the list in (b)(i).

.....

..... [1]

- (c) The student adds a small piece of magnesium to solution **F**.

The reaction mixture fizzes and produces hydrogen gas.

Describe a test for hydrogen gas and give the observation for a positive test.

test .....

observation .....

[2]

- (d) The student bubbles some carbon dioxide through solution **H**.

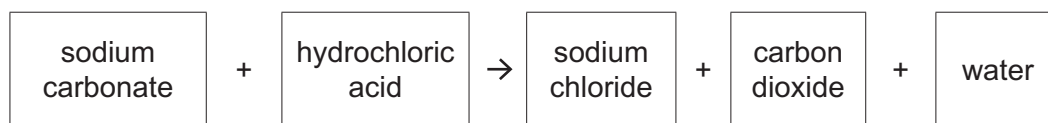
Solution **H** goes milky because it forms an insoluble white precipitate.

Name solution **H**.

..... [1]

[Total: 7]

- 3 Sodium carbonate is a white solid that reacts with dilute hydrochloric acid as shown in the word equation.



When sodium carbonate is added to dilute hydrochloric acid the reaction fizzes (bubbles). When the fizzing stops the reaction is complete.

The time it takes for the reaction to be completed is called the reaction time.

Plan an investigation to find out how the reaction time depends on the temperature of the hydrochloric acid.

You are provided with:

- sodium carbonate powder
- dilute hydrochloric acid

You may use any common laboratory apparatus in your plan.

In your plan, include:

- the apparatus needed
- a brief description of the method and explain any safety precautions you would take
- what you would measure
- which variables you would keep constant
- how you would process your results to draw a conclusion.

You may include a labelled diagram if you wish.

You may include a table that can be used to record the results if you wish.







- 4 A student investigates how forces affect an elastic band.

Fig. 4.1 shows the elastic band before it is used by the student. It is drawn full-size. The elastic band has not yet been stretched with any forces.

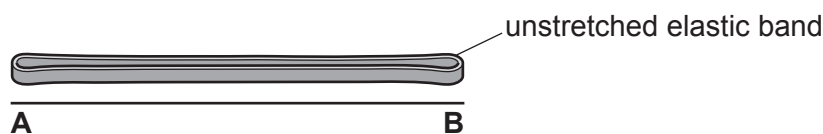


Fig. 4.1

### Procedure

The student:

- suspends the elastic band from a nail and carefully places a 100g mass hanger onto the elastic band as shown in Fig. 4.2

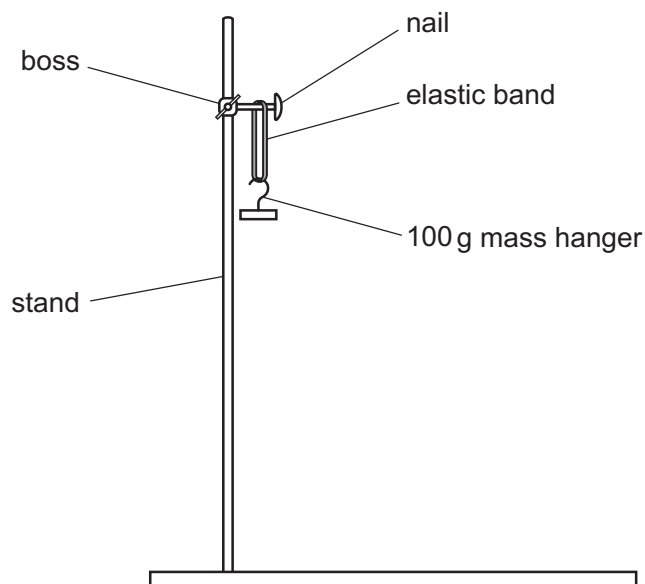


Fig. 4.2

- measures and records in Table 4.1 the stretched length of the elastic band
- without removing the mass hanger, carefully adds a 100g mass to the hanger
- measures and records in Table 4.1 the stretched length of the elastic band
- continues adding 100g masses one at a time until a total of 500g is suspended from the elastic band, recording the length each time
- carefully removes the 100g masses, one at a time
- after removing each 100g mass, measures and records in Table 4.2 the stretched length of the elastic band
- measures the final length of the elastic band after the mass hanger has been removed.

- (a) Measure the unstretched length of the elastic band in Fig. 4.1 from point **A** to **B** to the nearest millimetre and record your result in Table 4.1.

Table 4.1

| mass /g | force /N | length of elastic band /mm |
|---------|----------|----------------------------|
| 0       | 0        |                            |
| 100     | 1.0      | 65                         |
| 200     | 2.0      | 73                         |
| 300     | 3.0      | 90                         |
| 400     | 4.0      | 125                        |
| 500     | 5.0      | 166                        |

Table 4.2

| mass /g | force /N | length of elastic band /mm |
|---------|----------|----------------------------|
| 500     | 5.0      | 166                        |
| 400     | 4.0      | 152                        |
| 300     | 3.0      | 136                        |
| 200     | 2.0      | 107                        |
| 100     | 1.0      | 78                         |
| 0       | 0        | 64                         |

[1]

- (b) Explain why the student wears safety goggles during this experiment.


.....

..... [1]

- (c) Use the information in Table 4.1 to deduce the force exerted by a 650 g mass.

force = ..... N [1]

- (d) (i) Use the results in Table 4.1 to plot a graph of the length of the elastic band (vertical axis) against force. Start your graph at (0,0).



- [2]
- (ii) Draw the best-fit curve. Label this curve “increasing force”. [1]
- (iii) Use your graph to estimate the length of the elastic band when a force of 2.5 N is applied to stretch it.

length of elastic band when force is 2.5 N = ..... mm [1]

- (iv) On the same axes, plot the results in Table 4.2. [1]
- (v) Draw the best-fit curve for the points plotted in (d)(iv). Label this curve “decreasing force”. [1]

(e) Work is done as the elastic band is stretched. Elastic potential energy is stored in the stretched band.

When the stretching force is removed, some of the stored elastic potential energy is converted into thermal energy. This thermal energy is represented by the area between the two best-fit curves on the graph.

- (i) Estimate the area on the graph by counting the number of 1 cm<sup>2</sup> squares between your two best-fit curves from 0–5 N. Show how you arrived at your answer.

area between the two best-fit curves = ..... [2]

- (ii) Suggest how the student can improve the **experimental procedure** to get a more accurate estimate of the energy lost in the elastic band.

.....  
 ..... [1]

(f) The area between the two best-fit curves can be used to calculate the energy lost.

A student does this experiment with a **different** elastic band.  
 The student calculates the area between their two best-fit curves as 150 N mm.

Calculate the energy lost when the student’s elastic band is stretched.

Use the equation shown.

$$\text{energy lost} = \text{area between the two best-fit lines} \times 0.001$$

energy lost = ..... J [1]

[Total: 13]



**BLANK PAGE**

---

Permission to reproduce items where third-party owned material protected by copyright is included has been sought and cleared where possible. Every reasonable effort has been made by the publisher (UCLES) to trace copyright holders, but if any items requiring clearance have unwittingly been included, the publisher will be pleased to make amends at the earliest possible opportunity.

To avoid the issue of disclosure of answer-related information to candidates, all copyright acknowledgements are reproduced online in the Cambridge Assessment International Education Copyright Acknowledgements Booklet. This is produced for each series of examinations and is freely available to download at [www.cambridgeinternational.org](http://www.cambridgeinternational.org) after the live examination series.

Cambridge Assessment International Education is part of the Cambridge Assessment Group. Cambridge Assessment is the brand name of the University of Cambridge Local Examinations Syndicate (UCLES), which itself is a department of the University of Cambridge.