



Cambridge International AS Level

CANDIDATE
NAME


--

CENTRE
NUMBER

--	--	--	--	--

CANDIDATE
NUMBER

--	--	--	--



ENVIRONMENTAL MANAGEMENT

8291/12

Paper 1 Principles of Environmental Management

October/November 2022

1 hour 45 minutes

You must answer on the question paper.

No additional materials are needed.

INSTRUCTIONS

- Section A: answer **all** questions.
- Section B: answer **one** question.
- Use a black or dark blue pen. You may use an HB pencil for any diagrams or graphs.
- Write your name, centre number and candidate number in the boxes at the top of the page.
- Write your answer to each question in the space provided.
- Do **not** use an erasable pen or correction fluid.
- Do **not** write on any bar codes.
- You may use a calculator.
- You should show all your working and use appropriate units.

INFORMATION

- The total mark for this paper is 80.
- The number of marks for each question or part question is shown in brackets [].

This document has **20** pages. Any blank pages are indicated.

Section A

Answer **all** questions in this section.

1 (a) Fig. 1.1 shows an ecological pyramid of numbers for a grassland biome.

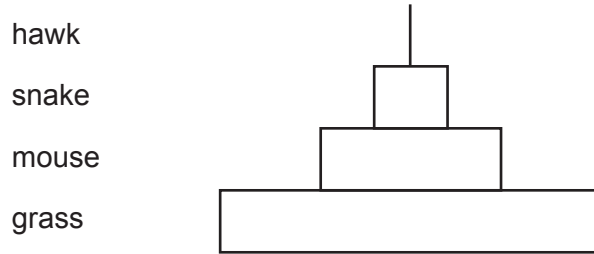


Fig. 1.1

(i) State the trophic level of the snake in Fig. 1.1.

..... [1]

(ii) Explain why the grass in Fig. 1.1 is called the producer.

.....
.....
.....
..... [2]

(iii) Explain the shape of the ecological pyramid in Fig. 1.1.

.....
.....
.....
.....
.....
..... [3]

(b) Fire ants are an invasive species of tropical grassland. They displace native ants and kill many species of insects.

(i) Define the term invasive species.

.....
.....
.....
..... [2]

(ii) Explain how an invasion of Fire ants can affect the food web of a tropical grassland.

.....
.....
.....
.....
.....
..... [3]

(c) The grassland biome is also under threat from human activity.

(i) Suggest **two** human activities which can affect the biodiversity of a grassland biome.

1
.....
2
..... [2]

(ii) Describe methods to conserve the biodiversity of a grassland biome.

.....
.....
.....
.....
.....
.....
.....
..... [4]

[Total: 17]

2 Fig. 2.1 shows a simplified water cycle.

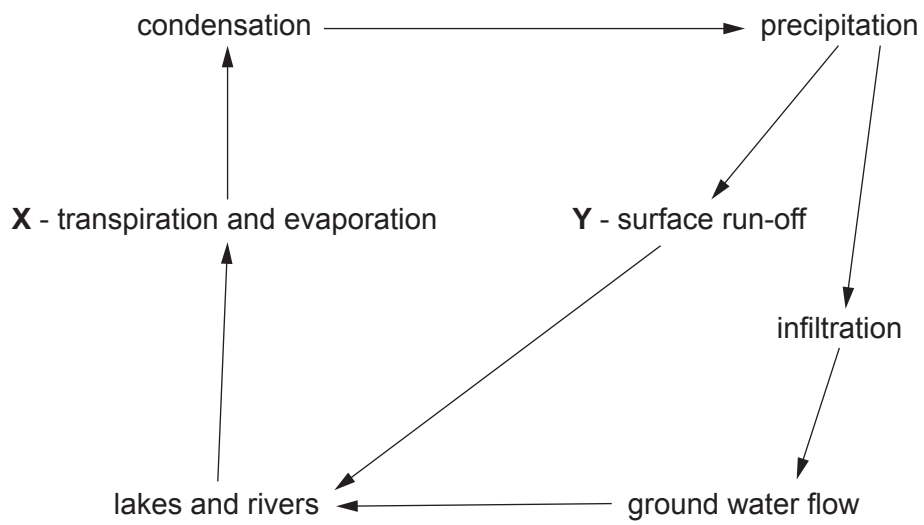


Fig. 2.1

(a) Explain the role of plants at X and Y in the water cycle in Fig. 2.1.

X

.....

.....

.....

.....

Y

.....

.....

.....

[4]

(b) Suggest the effects of urbanisation on the water cycle in Fig. 2.1.

Give reasons for your answers.

.....

.....

.....

.....

.....

.....

.....

.....

.....

.....

.....

..... [4]

[Total: 8]

- 3 (a) Table 3.1 shows population information for Germany, a country in Europe, and Nigeria, a country in Africa.

Table 3.1

age group	population	
	Germany	Nigeria
0–14	10 323 982	86 366 541
15–64	52 141 917	110 453 234
65+	17 991 838	6 632 730

- (i) Use Table 3.1 to calculate the percentage of the population aged 65+ in Nigeria.

percentage = [2]

- (ii) The dependency ratio for Nigeria is 84.2.

The dependency ratio is calculated by the equation

$$\text{dependency ratio} = \frac{[\text{young population (0 to 14)} + \text{old population (65+)}] \times 100}{\text{population aged 15 to 64}}$$

Calculate the dependency ratio for Germany using the data from Table 3.1.

dependency ratio = [2]

(iii) Suggest reasons for the difference between the dependency ratio for countries in different income groups.

.....
.....
.....
.....
.....
.....
.....
..... [4]

(b) Explain **one** factor which affects human migration rate.

factor

explanation

..... [2]

(c) Describe **two** strategies to manage a changing population.

.....
.....
.....
.....
.....
.....
..... [4]

[Total: 14]

- 4 (a) Fig. 4.1 is a graph showing the area of Antarctic sea ice recorded on 22 April each year.



Fig. 4.1

- (i) Describe the changes in Antarctic sea ice area in Fig. 4.1.

.....

.....

.....

..... [2]

- (ii) Suggest reasons for the changes in Antarctic sea ice area in Fig. 4.1.

.....

.....

.....

.....

.....

.....

.....

.....

.....

..... [4]

(b) The Antarctic Treaty has been in place since 1959.

(i) Explain why reaching international agreement to protect habitats is difficult to achieve.

.....

.....

.....

.....

.....

.....

..... [3]

(ii) Describe strategies used to protect the Antarctic environment.

.....

.....

.....

.....

.....

.....

.....

.....

.....

..... [4]

[Total: 13]

5 (a) Complete Table 5.1 to identify non-renewable and renewable energy resources using the following terms.

oil wind solar nuclear geothermal

Table 5.1

non-renewable	renewable

[2]

(b) Define the term energy security.

.....
.....
.....
..... [2]

(c) Explain **two** causes of energy insecurity.

.....
.....
.....
.....
.....
.....
.....
..... [4]

[Total: 8]

BLANK PAGE

The boundaries and names shown, the designations used and the presentation of material on any maps contained in this question paper/insert do not imply official endorsement or acceptance by Cambridge Assessment International Education concerning the legal status of any country, territory, or area or any of its authorities, or of the delimitation of its frontiers or boundaries.

Permission to reproduce items where third-party owned material protected by copyright is included has been sought and cleared where possible. Every reasonable effort has been made by the publisher (UCLES) to trace copyright holders, but if any items requiring clearance have unwittingly been included, the publisher will be pleased to make amends at the earliest possible opportunity.

To avoid the issue of disclosure of answer-related information to candidates, all copyright acknowledgements are reproduced online in the Cambridge Assessment International Education Copyright Acknowledgements Booklet. This is produced for each series of examinations and is freely available to download at www.cambridgeinternational.org after the live examination series.

Cambridge Assessment International Education is part of Cambridge Assessment. Cambridge Assessment is the brand name of the University of Cambridge Local Examinations Syndicate (UCLES), which is a department of the University of Cambridge.