



# Cambridge IGCSE™

CANDIDATE  
NAME

--

CENTRE  
NUMBER

--	--	--	--	--

CANDIDATE  
NUMBER

--	--	--	--



## GEOGRAPHY

0460/11

Paper 1 Geographical Themes

October/November 2021

1 hour 45 minutes

You must answer on the question paper.

You will need: Insert (enclosed)  
Calculator  
Ruler

## INSTRUCTIONS

- Answer **three** questions in total, **one** from each section.
- Use a black or dark blue pen. You may use an HB pencil for any diagrams or graphs.
- Write your name, centre number and candidate number in the boxes at the top of the page.
- Write your answer to each question in the space provided.
- Do **not** use an erasable pen or correction fluid.
- Do **not** write on any bar codes.
- If additional space is needed, you should use the lined pages at the end of this booklet; the question number or numbers must be clearly shown.

## INFORMATION

- The total mark for this paper is 75.
- The number of marks for each question or part question is shown in brackets [ ].
- The insert contains additional resources referred to in the questions.

### Definitions

MEDCs – More Economically Developed Countries

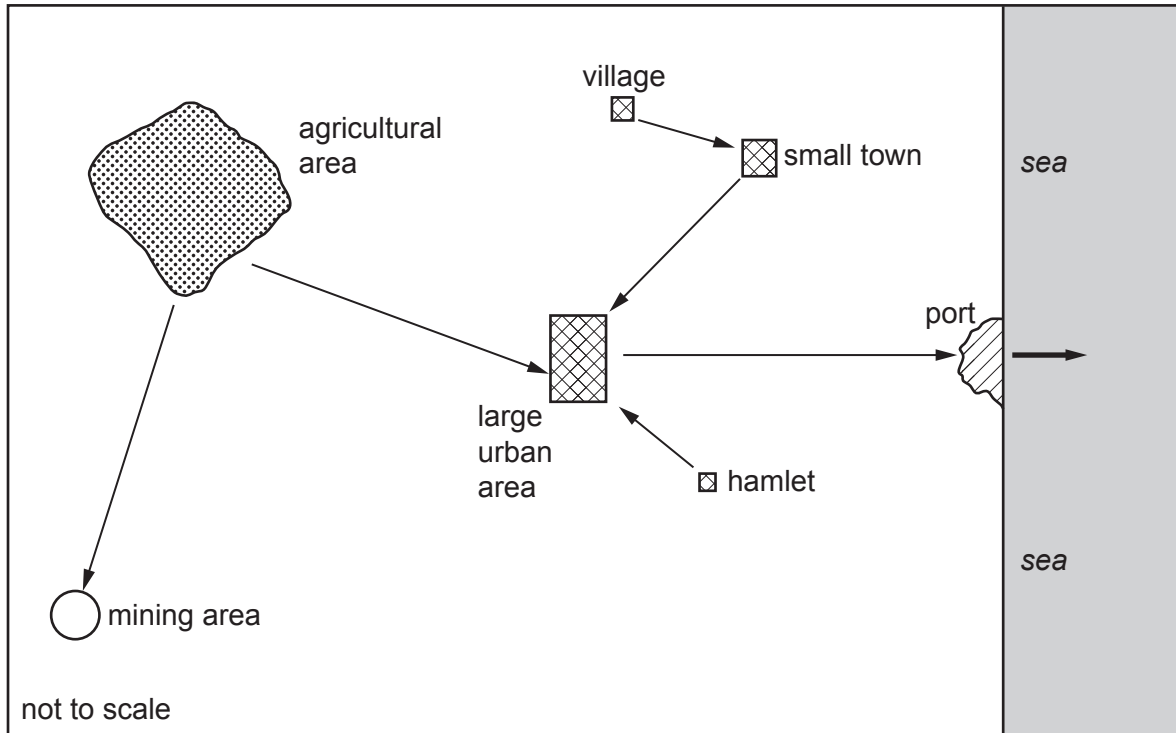
LEDCs – Less Economically Developed Countries

This document has **32** pages. Any blank pages are indicated.

Section A

Answer **one** question from this section.

- 1 (a) Study Fig. 1.1, which shows different examples of human migration within and from an LEDC.



**Key**

→ human migration

**Fig. 1.1**

- (i) What is meant by *human migration*?

.....  
..... [1]

- (ii) Identify **two** areas or types of settlement shown in Fig. 1.1 which have experienced negative net migration

1 .....

2 ..... [2]

(iii) Give **three** different reasons why international migration takes place from LEDCs.

- 1 .....
- .....
- 2 .....
- .....
- 3 .....
- ..... [3]

(iv) Explain why some countries encourage immigration to them but other countries limit the number of immigrants entering the country.

- .....
- .....
- .....
- .....
- .....
- .....
- .....
- .....
- ..... [4]

- (b) Study Fig. 1.2, which shows a population pyramid of people who have migrated to Manila, in the Philippines (an LEDC in Asia).

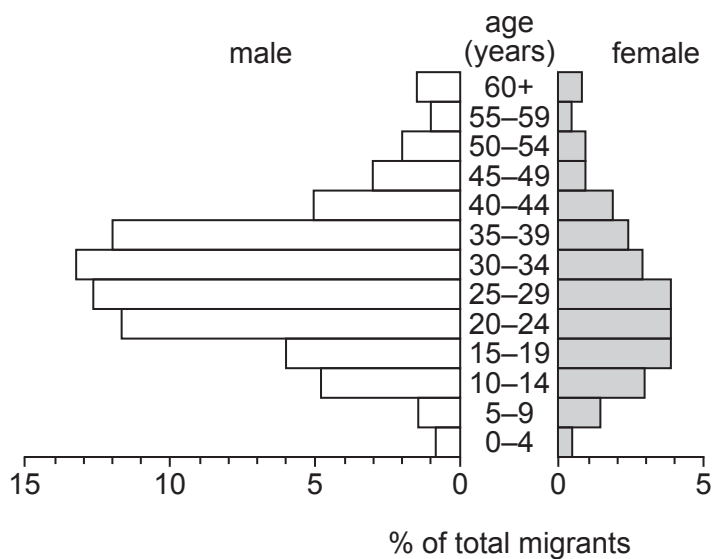


Fig. 1.2

- (i) Using Fig. 1.2 **only**, describe the population structure of the people who have migrated to Manila.

.....

.....

.....

.....

.....

..... [3]

- (ii) Describe the impacts of migration to urban areas in LEDCs **on the rural areas** from which people have migrated.

.....

.....

.....

.....

.....

.....

.....

.....

.....

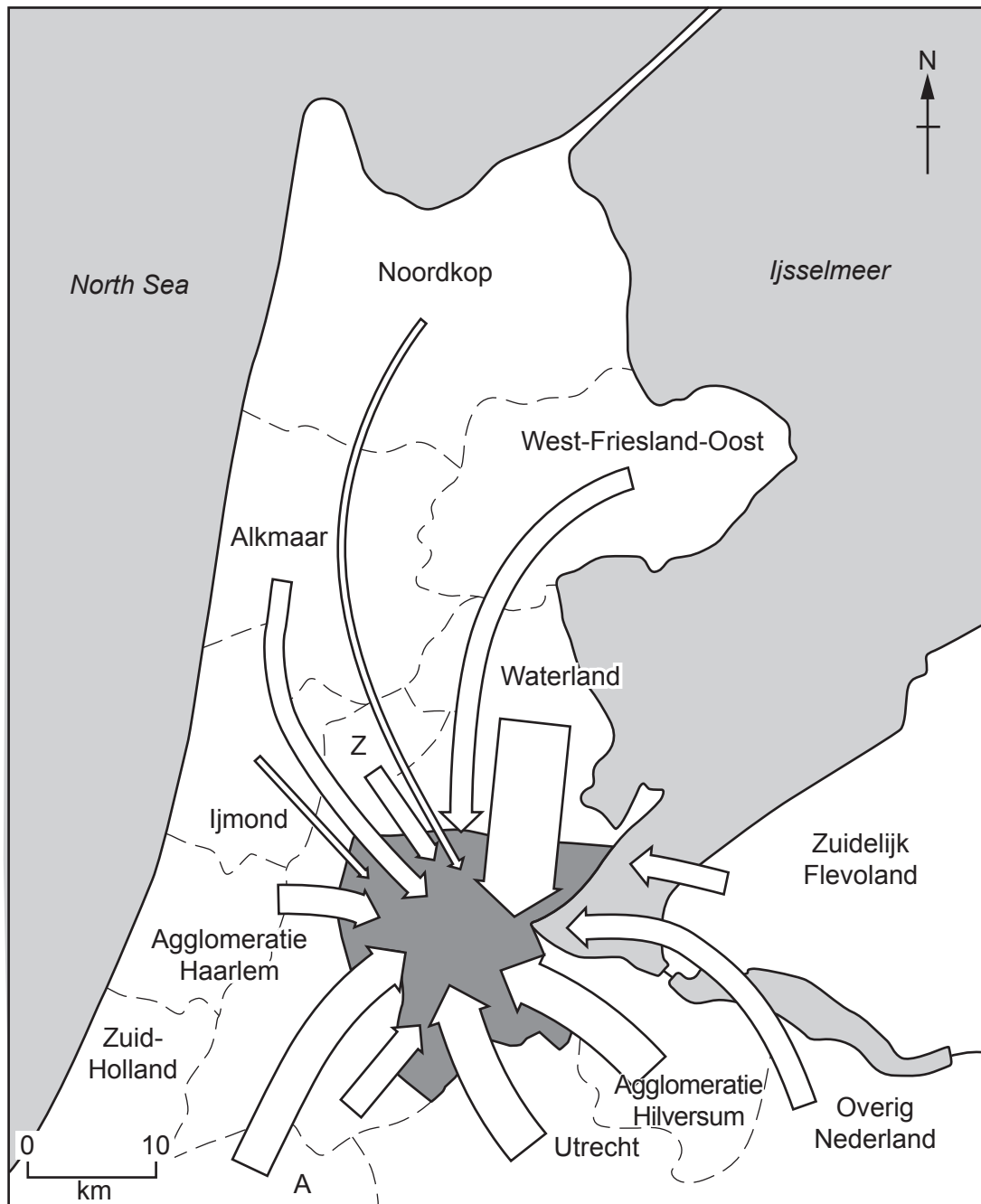
.....

.....

..... [5]

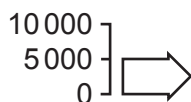


- 2 (a) Study Fig. 2.1, which is a map showing numbers of commuters to Amsterdam, a city in the Netherlands (an MEDC in Europe).  
A commuter is a person who travels daily to work.



**Key**

number of commuters into Amsterdam



--- district boundary




Amsterdam

Z Zaanstrech

A Alphen aan den Rijn

**Fig. 2.1**

- (i) Put the following regions in rank order according to the number of commuters travelling from them into Amsterdam.

Alkmaar	Noordkop	Waterland	
1st .....		most commuters	
2nd .....			
3rd .....		fewest commuters	[1]

- (ii) Describe the relationship between distance from Amsterdam and the number of commuters. Refer to named districts in your answer.

.....

.....

.....

..... [2]

- (iii) Explain why large numbers of commuters may cause traffic congestion in urban areas.

.....

.....

.....

.....

.....

..... [3]

- (iv) Explain why it is important to reduce traffic congestion in urban areas.

.....

.....

.....

.....

.....

.....

..... [4]

(b) Study Fig. 2.2, which shows strategies which can be used to reduce traffic problems in Amsterdam.

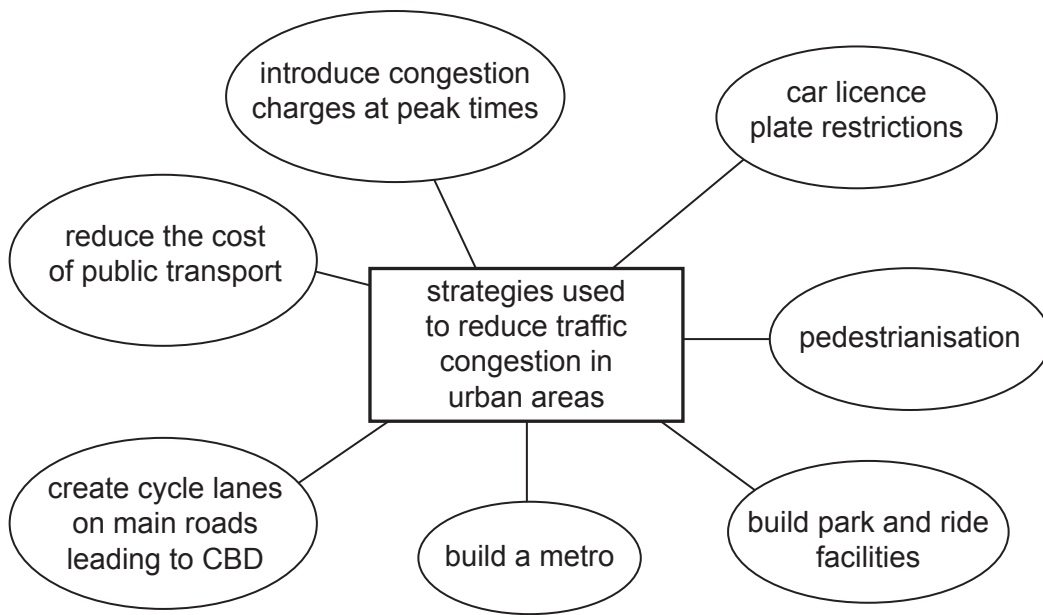


Fig. 2.2

(i) Choose any **three** of the strategies shown in Fig. 2.2. For each strategy you have chosen explain its meaning.

Strategy 1 .....

.....

.....

Strategy 2 .....

.....

.....

Strategy 3 .....

.....

.....

[3]





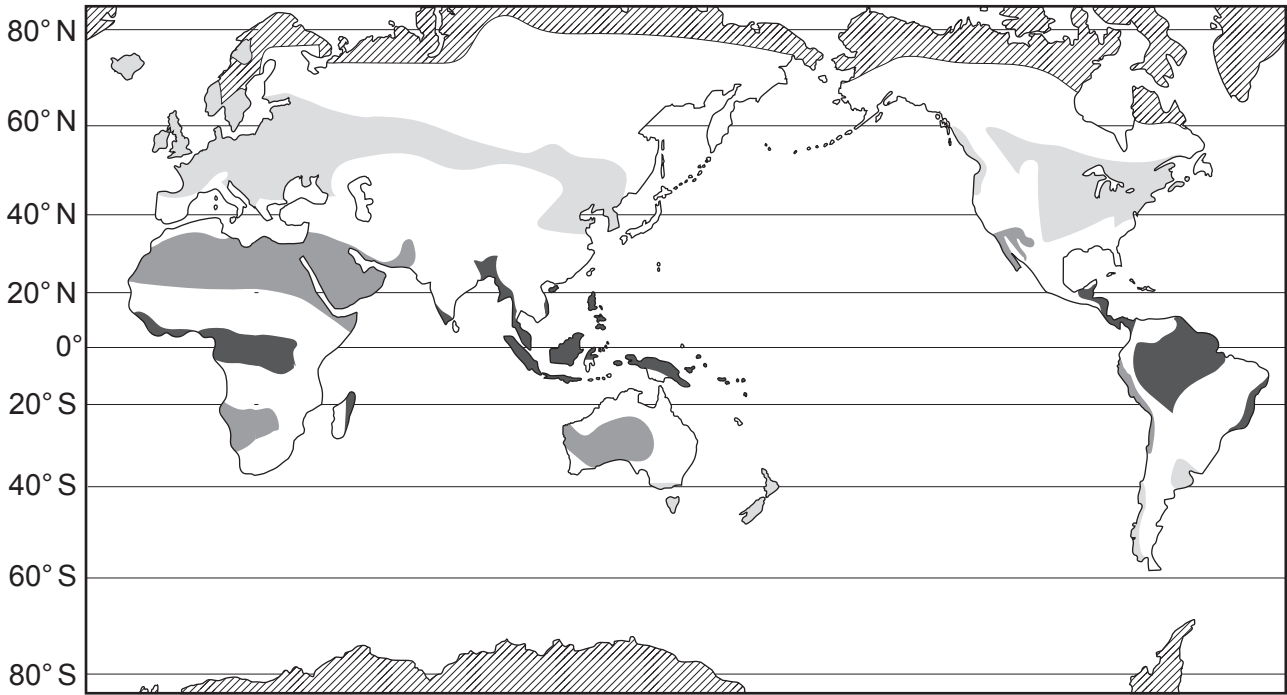


**TURN PAGE FOR QUESTION 3**

**Section B**

Answer **one** question from this section.

**3 (a)** Study Fig. 3.1, which shows four climatic zones.



**Key**

-  **A**
-  **B**
-  **C**
-  **D**

**Fig. 3.1**

**(i)** Which zone in Fig. 3.1, **A**, **B**, **C** or **D**, has an equatorial climate?

..... [1]

**(ii)** Arrange the following statements in the correct sequence to describe the typical daily weather pattern of areas with an equatorial climate:

- by sunset the sky is clear
- heavy rain falls
- sun rises in a clear sky
- cumulus clouds are formed
- sky becomes covered by clouds

1 .....

2 .....

3 .....

4 .....

5 ..... [2]

(iii) Explain why there is little seasonal variation in climate in equatorial areas.

.....  
.....  
.....  
.....  
.....  
..... [3]

(iv) Describe the processes which result in convective rainfall in equatorial areas.

.....  
.....  
.....  
.....  
.....  
.....  
.....  
..... [4]

(b) Study Fig. 3.2, which shows part of the ecosystem in an area of tropical rainforest.

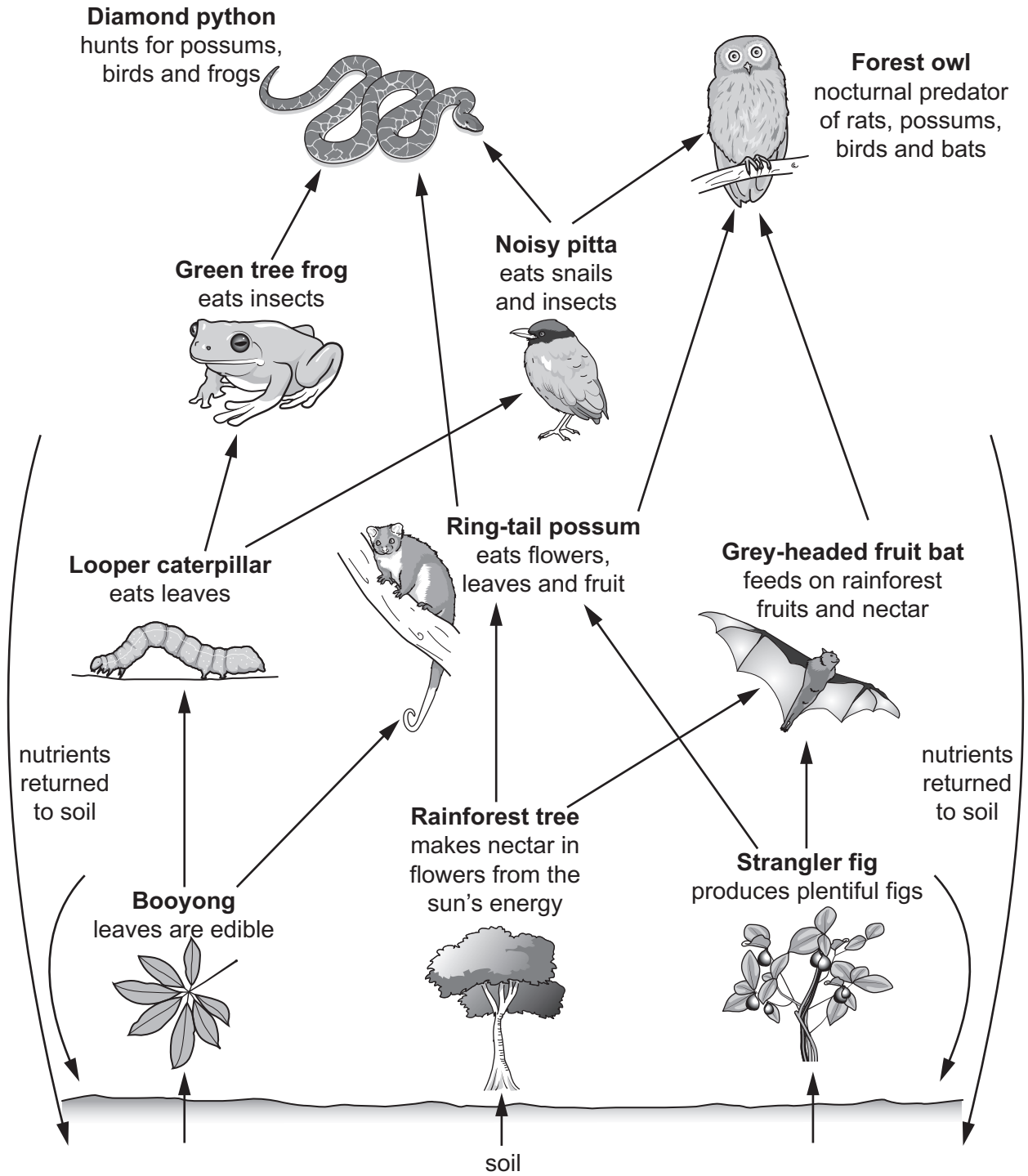


Fig. 3.2

(i) Using Fig. 3.2 **only**, describe **three** different ways in which vegetation, soil and wildlife depend on each other in a tropical rainforest.

1 .....

.....

2 .....

.....

3 .....

..... [3]

(ii) Describe the main characteristics of the natural vegetation in a tropical rainforest.

.....

.....

.....

.....

.....

.....

.....

.....

.....

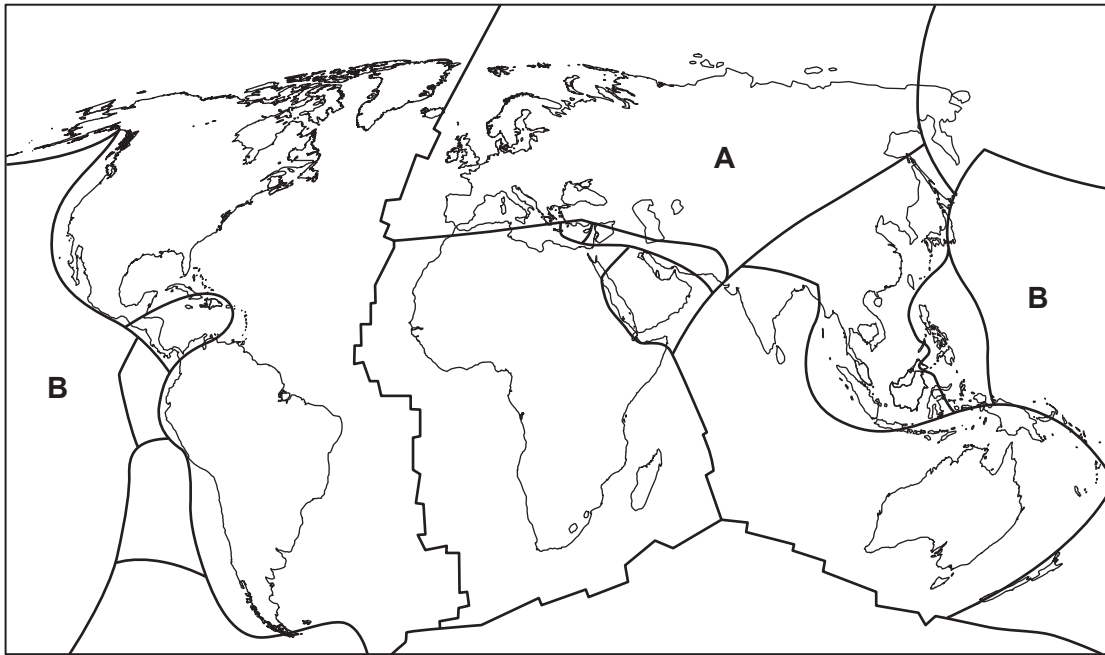
..... [5]





**TURN PAGE FOR QUESTION 4**

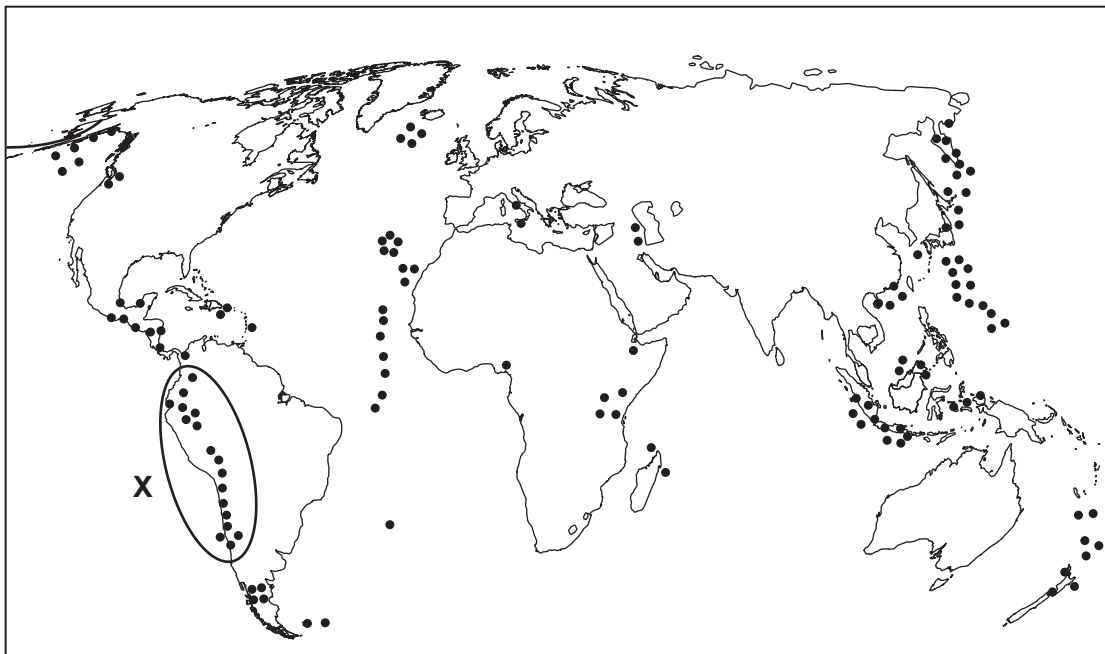
4 (a) Study Figs. 4.1 and 4.2, which show information about plate boundaries and volcanoes.



**Key**

— plate boundaries

**Fig. 4.1**



**Key**

••• active volcanoes

**Fig. 4.2**

(i) Using Fig. 4.1, define the term *plate*.

.....  
..... [1]

(ii) Name the plates labelled **A** and **B** in Fig. 4.1.

Choose from the following list.

- |                       |                 |                |
|-----------------------|-----------------|----------------|
| African Plate         | Caribbean Plate | Eurasian Plate |
| Indo-Australian Plate | Nazca Plate     | Pacific Plate  |

**A** .....

**B** ..... [2]

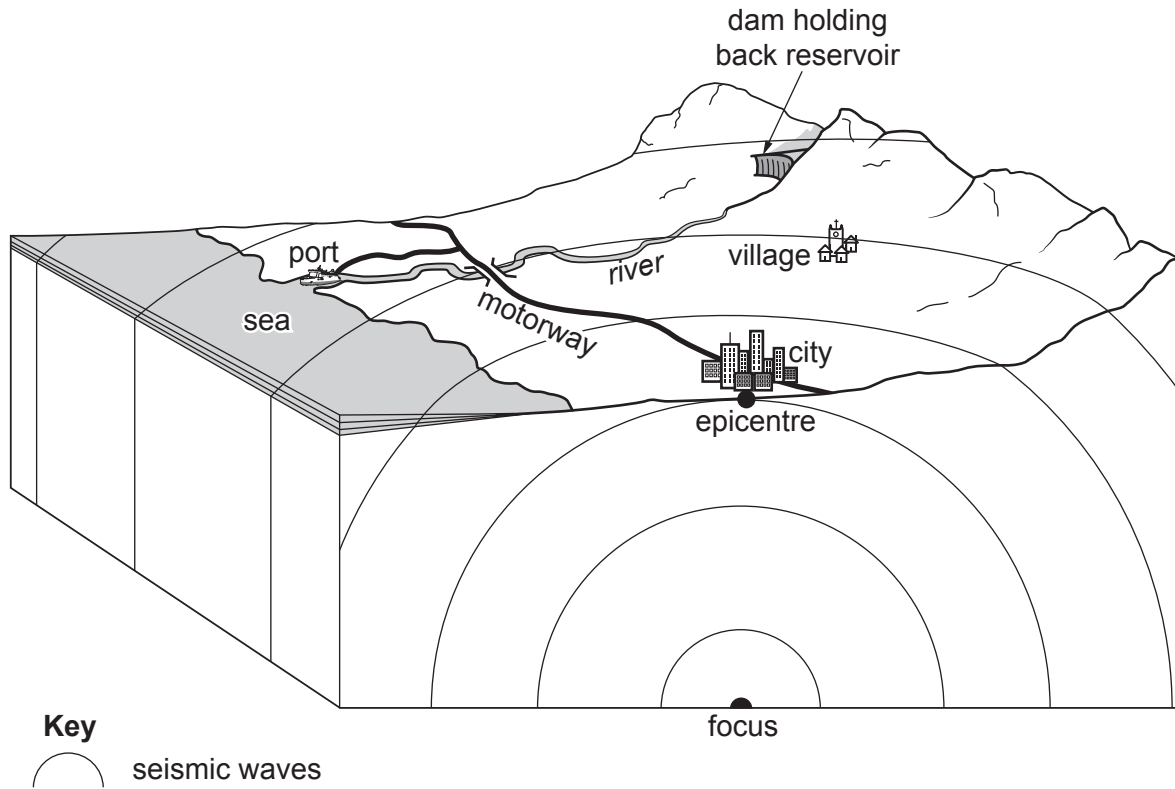
(iii) Describe the distribution of the active volcanoes shown in Fig. 4.2.

.....  
.....  
.....  
.....  
.....  
..... [3]

(iv) Area **X** on Fig. 4.2 is a destructive (convergent) plate boundary. Explain why there are active volcanoes in the area labelled **X**.

.....  
.....  
.....  
.....  
.....  
.....  
.....  
..... [4]

(b) Study Fig. 4.3, which shows an area affected by an earthquake.



**Key**  
⌒ seismic waves

**Fig. 4.3**

(i) State **three** problems that may be caused by the earthquake for people who live in the area shown in Fig. 4.3.

- 1 .....
  - 2 .....
  - 3 .....
- [3]





Section C

Answer **one** question from this section.

5 (a) Study Fig. 5.1 (Insert), which shows agricultural land use in Syria.

(i) Identify the most common agricultural land use in Syria.

..... [1]

(ii) Identify **two** crops grown within 50 km of Damascus, the capital city of Syria.

1 .....

2 ..... [2]

(iii) Using evidence from Fig. 5.1 **only**, suggest **three** reasons why farming is a more successful economic activity close to Latakia (population 383 000) than it is near Tadmur (population 51 000).

1 .....

.....

2 .....

.....

3 .....

..... [3]

(iv) Syria has recently experienced civil war. Explain why war may cause a country's food supply to decrease.

.....

.....

.....

.....

.....

.....

.....

..... [4]

(b) Study Figs. 5.2 and 5.3 (Insert), which are photographs of two different types of farm.

(i) Describe **three** differences between the farms shown in Figs. 5.2 and 5.3.

	Fig. 5.2	Fig. 5.3
Difference 1	..... ..... .....	..... ..... .....
Difference 2	..... ..... .....	..... ..... .....
Difference 3	..... ..... .....	..... ..... .....

[3]

(ii) Explain why relief influences agricultural land use.

.....  
 .....  
 .....  
 .....  
 .....  
 .....  
 .....  
 .....  
 .....  
 .....

[5]





- 6 (a) Study Fig. 6.1, which shows some of the industrial processes involved in assembling jet engines.

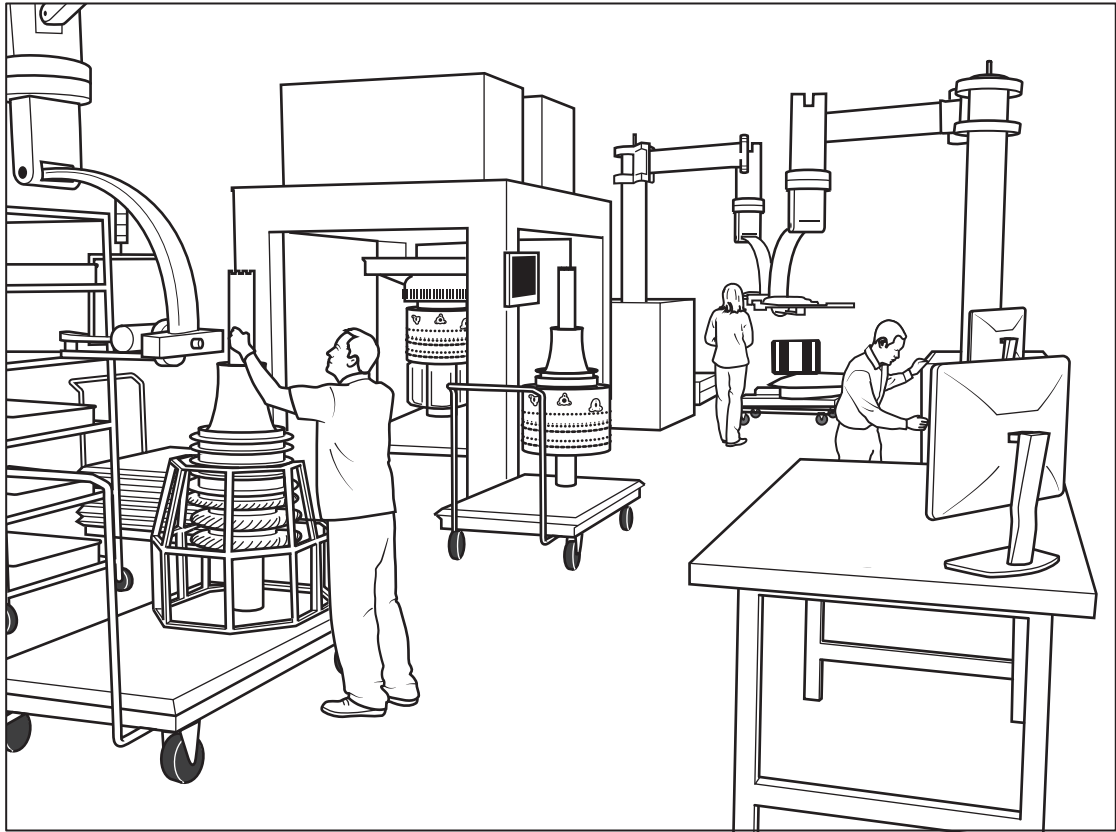


Fig. 6.1

- (i) What is meant by *industrial processes*?

.....  
..... [1]

- (ii) Using Fig. 6.1 **only**, describe **two** characteristics of the assembly industry shown.

1 .....

.....

2 .....

..... [2]

(iii) Suggest reasons why assembly industries such as that shown in Fig. 6.1 might cause fewer problems for the local natural environment than manufacturing and processing industries.

.....

.....

.....

.....

.....

..... [3]

(b) Study Figs. 6.2 and 6.3 (Insert), which are photographs of two different factories.

(i) Describe **three** differences between the factories shown in Figs. 6.2 and 6.3.

	<b>Fig. 6.2</b>	<b>Fig. 6.3</b>
Difference 1	..... ..... .....	..... ..... .....
Difference 2	..... ..... .....	..... ..... .....
Difference 3	..... ..... .....	..... ..... .....

[3]

- (ii) Explain why raw materials and markets may influence the location of manufacturing industry.

Dotted lines for writing answer for question (ii), ending with [4]

- (iii) The owner of the factory shown in Fig. 6.2 is considering moving the industry to a different location. Suggest reasons for this.

Dotted lines for writing answer for question (iii), ending with [5]







**BLANK PAGE**

---

The boundaries and names shown, the designations used and the presentation of material on any maps contained in this question paper/insert do not imply official endorsement or acceptance by Cambridge Assessment International Education concerning the legal status of any country, territory, or area or any of its authorities, or of the delimitation of its frontiers or boundaries.

Permission to reproduce items where third-party owned material protected by copyright is included has been sought and cleared where possible. Every reasonable effort has been made by the publisher (UCLES) to trace copyright holders, but if any items requiring clearance have unwittingly been included, the publisher will be pleased to make amends at the earliest possible opportunity.

To avoid the issue of disclosure of answer-related information to candidates, all copyright acknowledgements are reproduced online in the Cambridge Assessment International Education Copyright Acknowledgements Booklet. This is produced for each series of examinations and is freely available to download at [www.cambridgeinternational.org](http://www.cambridgeinternational.org) after the live examination series.

Cambridge Assessment International Education is part of the Cambridge Assessment Group. Cambridge Assessment is the brand name of the University of Cambridge Local Examinations Syndicate (UCLES), which itself is a department of the University of Cambridge.