



Cambridge IGCSE™

CANDIDATE
NAME

--

CENTRE
NUMBER

--	--	--	--	--

CANDIDATE
NUMBER

--	--	--	--



PAKISTAN STUDIES

0448/02

Paper 2 The Environment of Pakistan

May/June 2023

1 hour 30 minutes

You must answer on the question paper.

You will need: Insert (enclosed)
Ruler

INSTRUCTIONS

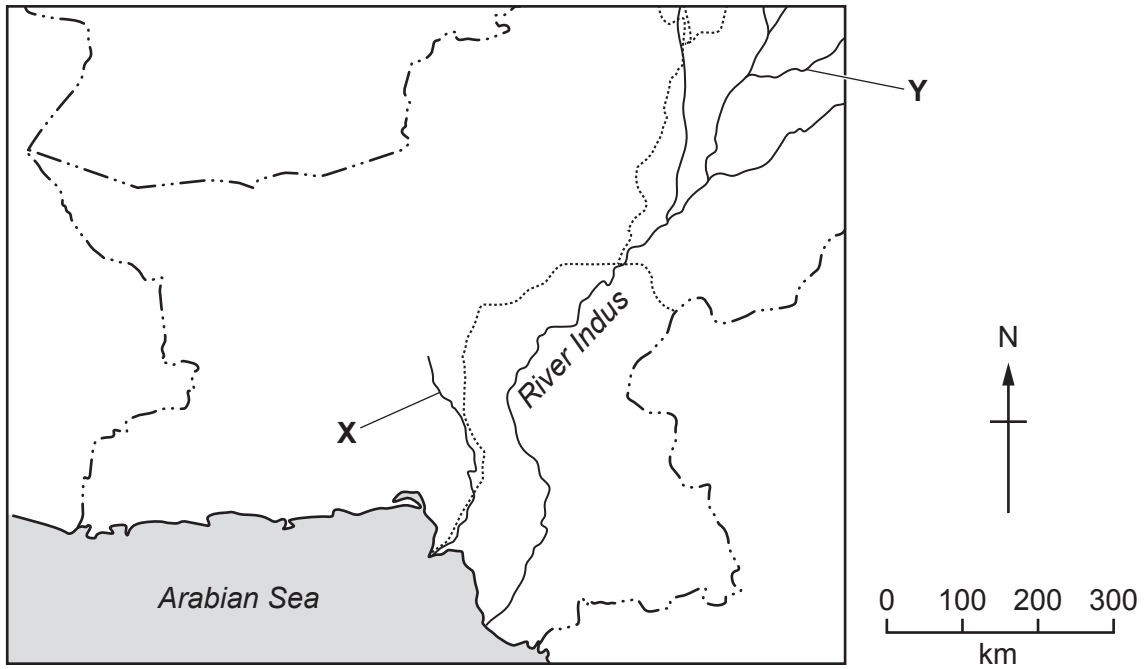
- Answer **three** questions.
- Use a black or dark blue pen.
- Write your name, centre number and candidate number in the boxes at the top of the page.
- Write your answer to each question in the space provided.
- Do **not** use an erasable pen or correction fluid.
- Do **not** write on any bar codes.
- If additional space is needed, you should use the lined page at the end of this booklet; the question number or numbers must be clearly shown.

INFORMATION

- The total mark for this paper is 75.
- The number of marks for each question or part question is shown in brackets [].
- The insert contains additional resources referred to in the questions.

This document has **20** pages.

1 (a) (i) Study Fig. 1.1, a map showing southern Pakistan and surrounding countries.



Key

- - - international boundary
- province-level boundary
- ~~~~~ river

Fig. 1.1

On Fig. 1.1 label the following: Afghanistan, India, Iran. You should write the name in the correct location on the map. [3]

(ii) Add a dot and the letter **K** onto Fig. 1.1 to show the location of Karachi. [1]

(iii) Using Fig. 1.1 **only**, what is the approximate length of Pakistan’s coastline? **Circle** the correct answer.

- 500 km 1000 km 1500 km [1]

(iv) Name the rivers labelled **X** and **Y** on Fig. 1.1.

X

Y

[2]

(b) Suggest **four** ways in which rivers are important to Pakistan.

- 1
 -
 - 2
 -
 - 3
 -
 - 4
 -
- [4]

(c) (i) Study Fig. 1.2 (Insert), a photograph showing part of the Karakoram range.

Describe the **natural** features of the landscape shown.

-
 -
 -
 -
 -
 -
 -
 -
 -
 -
- [4]

(ii) Explain **two** ways in which the natural topography shown in Fig. 1.2 influences human activities. You should develop your answer.

- 1
 -
 -
 -
 -
 - 2
 -
 -
 -
 -
- [4]

(b) (i) Describe the climate characteristics (rainfall and temperature) of the semi-arid region of Pakistan.

.....

.....

.....

.....

.....

.....

.....

.....

..... [4]

(ii) Explain **two** benefits of the climate for people living in mountain areas in Pakistan. You should develop your answer.

1

.....

.....

.....

.....

2

.....

.....

.....

..... [4]

(c) (i) What is hydel power? Tick (✓) **one** box below.

Hydel power is electricity generated using energy from:	tick (✓)
fast flowing water	
the sun's rays	
tides and waves	
wind	

[1]

(ii) Hydel power stations can be found in mountainous areas of Pakistan. Describe how electricity can be generated from hydel power.

.....

.....

.....

.....

.....

.....

.....

.....

..... [4]

- 3 (a) (i) Study Figs. 3.1, 3.2, 3.3 and 3.4 (Insert), photographs showing four different crops grown in Pakistan.

Identify the type of crop shown in each photograph.

Fig. 3.1

Fig. 3.2

Fig. 3.3

Fig. 3.4

[4]

- (ii) Using Fig. 3.1 (Insert) **only**, describe the characteristics of the crop shown.

.....
.....
.....
..... [2]

(ii) Explain **two** reasons why sheep are reared in the areas shown in Fig. 3.5. You should develop your answer.

1

.....

.....

.....

.....

2

.....

.....

.....

[4]

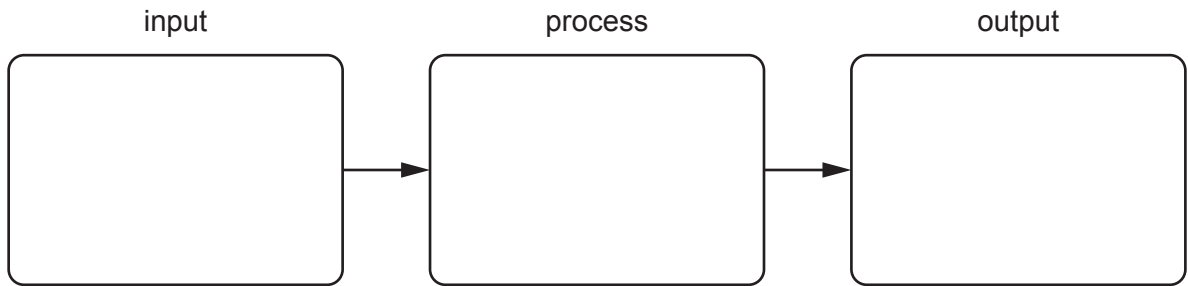
(c) (i) Define 'cash crop farming'.

.....

..... [1]

(ii) **Complete** the diagram to show how cash crop farming operates as a system. You should give **one** example of:

- an input;
- a process;
- an output.



[3]

(iii) Suggest **two** ways agricultural production in Pakistan could be increased.

1

.....

2

.....

[2]

- 4 (a) (i) Study Fig. 4.1, a diagram showing the intended destination for the main products of some of Pakistan’s major industries.

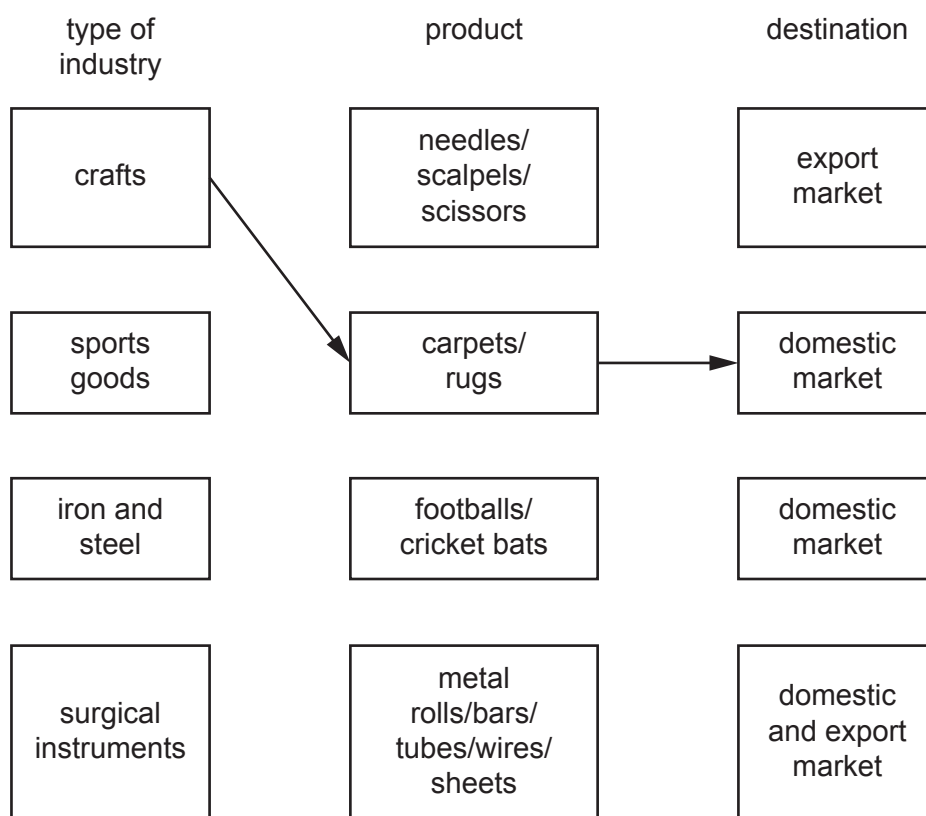


Fig. 4.1

Complete Fig. 4.1 by using arrows to match the type of industry with the correct product and its main destination. An example has been done for you. [3]

- (ii) State **one** city where each of the following industries takes place in Pakistan.

sports goods

iron and steel

surgical instruments

[3]

- (iii) To which sector do the types of industry named in (a)(i) belong? **Circle** the correct answer.

primary

secondary

tertiary

[1]

(b) (i) Study Fig. 4.2 (Insert), a photograph taken inside a steel mill in Pakistan.

Using Fig. 4.2 **only**, describe **three** features of the steel mill shown.

- 1
-
- 2
-
- 3
-

[3]

(ii) Study Fig. 4.3, a line graph showing changes in the percentage share of total employment by employment sector in Pakistan between 2012 and 2020.

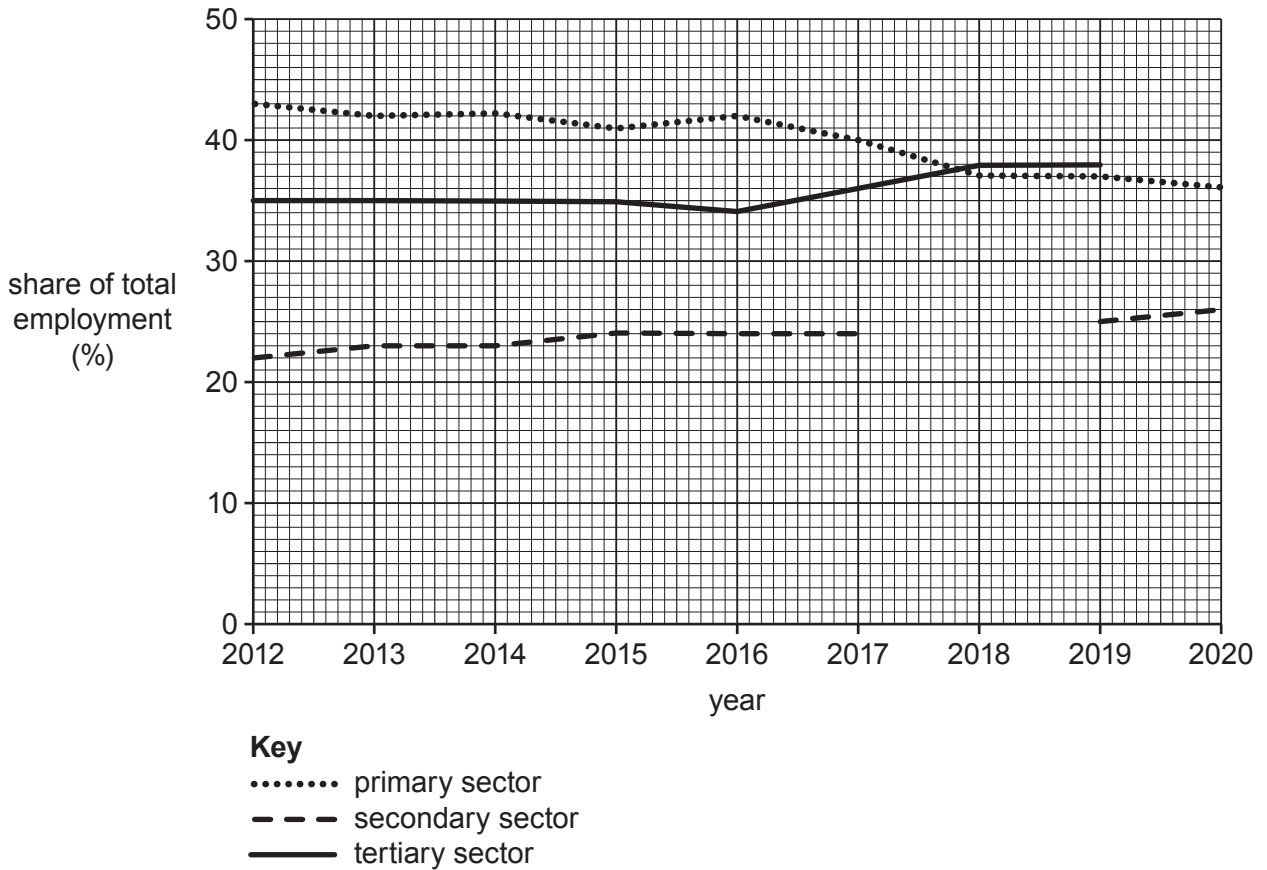


Fig. 4.3

Complete Fig. 4.3 by plotting the percentage share employed in the secondary sector in 2018 and the tertiary sector in 2020 using the information below.

sector	year	percentage (%)
secondary	2018	25
tertiary	2020	38

[2]

(iii) Suggest reasons for the changes in the percentage share of total employment for each employment sector shown in Fig. 4.3.

primary

.....

secondary

.....

tertiary

.....

[3]

(c) Explain **two** factors influencing the location of the iron and steel industry in Pakistan. You should develop your answer.

1

.....

.....

.....

2

.....

.....

.....

[4]

5 (a) (i) Study Fig. 5.1 (Insert), a map showing part of the urban area of Islamabad.

Using Fig. 5.1 **only**, describe the location of the 'National Institute of Health'.

.....
.....
.....
.....
.....
..... [3]

(ii) Using Fig. 5.1 **only**, identify **two** areas used for leisure and recreation.

1

2

[2]

(iii) Fig. 5.1 shows an area around the edge of Islamabad that could be used for future development. Suggest **three** ways in which this area could be developed for leisure and tourism.

1

.....

2

.....

3

.....

[3]

